

1. Aşağıdaki toplama işlemlerini örnekteki gibi yapalım.

$$\begin{array}{r} \textcircled{1} \\ 256 \\ + 327 \\ \hline 583 \end{array}$$

$$\begin{array}{r} \textcircled{}\textcircled{} \\ 395 \\ + 439 \\ \hline \end{array}$$

$$\begin{array}{r} \textcircled{} \\ 735 \\ + 218 \\ \hline \end{array}$$

$$\begin{array}{r} \textcircled{}\textcircled{} \\ 656 \\ + 199 \\ \hline \end{array}$$

$$\begin{array}{r} \textcircled{}\textcircled{} \\ 635 \\ + 199 \\ \hline \end{array}$$

$$\begin{array}{r} \textcircled{}\textcircled{} \\ 286 \\ + 524 \\ \hline \end{array}$$

$$\begin{array}{r} \textcircled{}\textcircled{} \\ 307 \\ + 299 \\ \hline \end{array}$$

$$\begin{array}{r} \textcircled{} \\ 654 \\ + 126 \\ \hline \end{array}$$

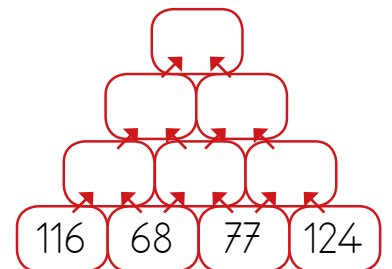
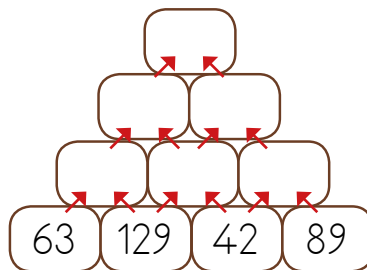
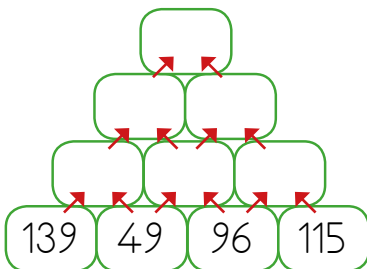
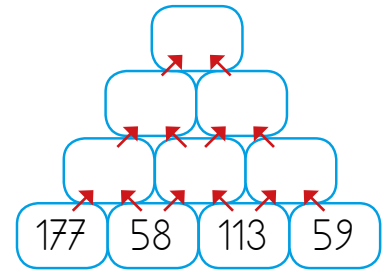
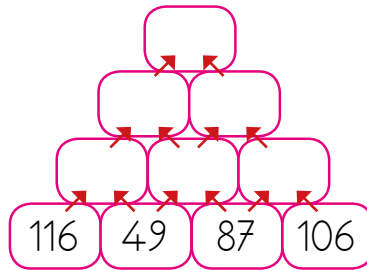
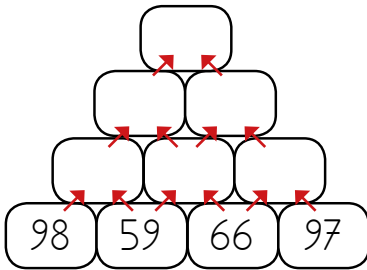
$$\begin{array}{r} \textcircled{}\textcircled{} \\ 135 \\ + 597 \\ \hline \end{array}$$

$$\begin{array}{r} \textcircled{}\textcircled{} \\ 259 \\ + 366 \\ \hline \end{array}$$

$$\begin{array}{r} \textcircled{}\textcircled{} \\ 274 \\ + 189 \\ \hline \end{array}$$

$$\begin{array}{r} \textcircled{} \\ 663 \\ + 228 \\ \hline \end{array}$$

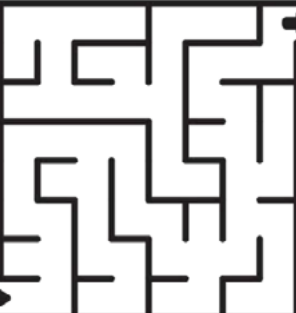

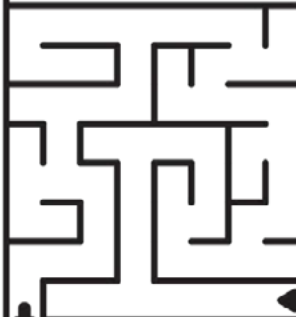






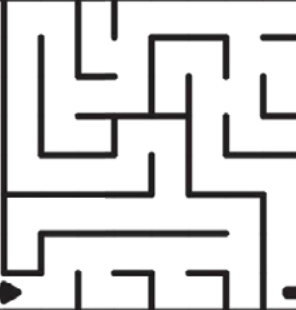
1. Aşağıdaki toplama işlemlerini ok yönünde yapalım.



1. Aşağıda toplamı işlemlerini örnekteki gibi yapalım.

a.	①	②		b.	○	○		c.	○	○		d.	○	○	
	2	3	8		3	2	4		1	4	8		3	1	4
	1	5	6		2	4	5		5	6	4		1	6	8
+	4	3	7	+	2	6	3	+		6	7	+		3	7
	8	3	1												
e.	○	○		f.	○	○		g.	○	○		h.	○	○	
	4	8	3		2	5	4		3	1	8		4	4	4
	2	4	8		3	8	8		1	0	8		2	0	5
+	1	1	9	+	1	9	6	+	4	9	9	+		9	9
i.	○	○		j.	○	○		k.	○	○		l.	○	○	
	3	5	6		2	4	3		2	1	8		3	6	4
	1	6	7		1	8	1		3	0	9		1	9	8
+	3	0	8	+	1	3	6	+		8	7	+	1	0	0
m.	○	○		n.	○	○		o.	○	○		p.	○	○	
	2	4	3		1	5	5		2	5	6		1	7	7
	1	6	6		3	0	9		1	0	8		1	9	7
+	1	8	7	+	3	9	1	+	1	5	8	+	1	5	4
r.	○	○		s.	○	○		t.	○	○		u.	○	○	
	3	2	6		6	4	2		3	5	4		2	5	4
	1	0	9		1	6	8		1	8	9		1	6	6
+	1	8	8	+		9	7	+	2	1	1	+	3	7	7


1. Aşağıdaki toplama işlemlerini başlangıçtan itibaren yapalım. Bir sonraki işleme geçmek için labirenti çözelim.

1 $\begin{array}{r} 568 \\ +136 \\ \hline \end{array}$		2 $\begin{array}{r} 147 \\ +239 \\ \hline \end{array}$	
	4 $\begin{array}{r} 256 \\ +199 \\ \hline \end{array}$		3 $\begin{array}{r} 152 \\ +699 \\ \hline \end{array}$
5 $\begin{array}{r} 345 \\ +366 \\ \hline \end{array}$		6 $\begin{array}{r} 309 \\ +198 \\ \hline \end{array}$	
	8 $\begin{array}{r} 236 \\ +169 \\ \hline \end{array}$		7 $\begin{array}{r} 352 \\ +159 \\ \hline \end{array}$
9 $\begin{array}{r} 506 \\ +196 \\ \hline \end{array}$		10 $\begin{array}{r} 426 \\ +188 \\ \hline \end{array}$	

1. Aşağıdaki toplama işlemlerini yapalım. Bulduğumuz sonuçlara göre sayıların buldukları bölümleri uygun renklerle boyayalım.

201 - 300	Turuncu
301 - 400	Mavi
401 - 500	Sarı
501 - 600	Pembe

601 - 700	Kahverengi
701 - 800	Beyaz (Boş)
801 - 900	Siyah



1. Aşağıdaki toplama işlemlerini yapalım. Bulduğumuz sonuçlara göre sayıların buldukları bölümleri uygun renklerle boyayalım.

201 - 300	Pembe
301 - 400	Ten Rengi
401 - 500	Sarı
501 - 600	Mavi

601 - 700	Turuncu
701 - 800	Kahverengi
801 - 900	Yeşil

$126+160=$	$461+132=$	$124+152=$	$338+249=$	$122+119=$	$259+324=$
$648+217=$	452 $+332$	453 $+446$	$555+266=$	$719+137=$ 435 $+249$	
725 $+166$	129 $+203$	681 $+207$	338 $+315$	$329+312=$	
$122+220=$	$551+318=$	$523+110=$	357 $+444$		
483 $+369$	329 $+167$	$302+159=$	$359+471=$	$477+372=$	
468 $+359$	349 $+130$	$143+320=$	127 $+255$	547 $+213$	675 $+217$
$571+282=$	$564+282=$	343 $+527$	$124+255=$	$461+393=$	
$420+145=$	$120+165=$	$257+327=$	$125+171=$	$249+289=$	$123+126=$

1. Aşağıda toplamı işlemlerini örnekteki gibi yapalım.

+	123	145	119
309	432	454	428
168			
317			

+	518	225	357
156			
237			
199			

2. Aşağıda toplamı işlemlerini yapıp sonuçları bulmacaya yazalım.

$$\begin{array}{r} 488 \\ +354 \\ \hline \end{array}$$

1

$$\begin{array}{r} 379 \\ +363 \\ \hline \end{array}$$

2

$$\begin{array}{r} 196 \\ +367 \\ \hline \end{array}$$

3

$$\begin{array}{r} 154 \\ +418 \\ \hline \end{array}$$

4

$$\begin{array}{r} 427 \\ +176 \\ \hline \end{array}$$

5

$$\begin{array}{r} 178 \\ +615 \\ \hline \end{array}$$

6

$$\begin{array}{r} 623 \\ +129 \\ \hline \end{array}$$

7

$$\begin{array}{r} 142 \\ +399 \\ \hline \end{array}$$

8

$$\begin{array}{r} 248 \\ +413 \\ \hline \end{array}$$

9

1

2

3

4

5

6

7

8

9



1. Aşağıda toplamı işlemlerini yapalım.

$$\begin{array}{r} 1. \quad 233 \\ + 682 \\ \hline \end{array}$$

$$\begin{array}{r} 2. \quad 699 \\ + 206 \\ \hline \end{array}$$

$$\begin{array}{r} 3. \quad 160 \\ + 335 \\ \hline \end{array}$$

$$\begin{array}{r} 4. \quad 220 \\ + 602 \\ \hline \end{array}$$

$$\begin{array}{r} 5. \quad 605 \\ + 113 \\ \hline \end{array}$$

$$\begin{array}{r} 6. \quad 255 \\ + 628 \\ \hline \end{array}$$

$$\begin{array}{r} 7. \quad 327 \\ + 325 \\ \hline \end{array}$$

$$\begin{array}{r} 8. \quad 532 \\ + 230 \\ \hline \end{array}$$

$$\begin{array}{r} 9. \quad 564 \\ + 155 \\ \hline \end{array}$$

$$\begin{array}{r} 10. \quad 448 \\ + 211 \\ \hline \end{array}$$

$$\begin{array}{r} 11. \quad 354 \\ + 449 \\ \hline \end{array}$$

$$\begin{array}{r} 12. \quad 132 \\ + 444 \\ \hline \end{array}$$

$$\begin{array}{r} 13. \quad 321 \\ + 133 \\ \hline \end{array}$$

$$\begin{array}{r} 14. \quad 528 \\ + 209 \\ \hline \end{array}$$

$$\begin{array}{r} 15. \quad 210 \\ + 768 \\ \hline \end{array}$$

$$\begin{array}{r} 16. \quad 426 \\ + 498 \\ \hline \end{array}$$

$$\begin{array}{r} 17. \quad 126 \\ + 533 \\ \hline \end{array}$$

$$\begin{array}{r} 18. \quad 218 \\ + 644 \\ \hline \end{array}$$

$$\begin{array}{r} 19. \quad 569 \\ + 261 \\ \hline \end{array}$$

$$\begin{array}{r} 20. \quad 201 \\ + 219 \\ \hline \end{array}$$

$$\begin{array}{r} 21. \quad 817 \\ + 131 \\ \hline \end{array}$$

$$\begin{array}{r} 22. \quad 120 \\ + 127 \\ \hline \end{array}$$

$$\begin{array}{r} 23. \quad 328 \\ + 154 \\ \hline \end{array}$$

$$\begin{array}{r} 24. \quad 123 \\ + 634 \\ \hline \end{array}$$

$$\begin{array}{r} 25. \quad 304 \\ + 480 \\ \hline \end{array}$$

$$\begin{array}{r} 26. \quad 521 \\ + 440 \\ \hline \end{array}$$

$$\begin{array}{r} 27. \quad 298 \\ + 353 \\ \hline \end{array}$$

$$\begin{array}{r} 28. \quad 116 \\ + 263 \\ \hline \end{array}$$

$$\begin{array}{r} 29. \quad 797 \\ + 109 \\ \hline \end{array}$$

$$\begin{array}{r} 30. \quad 756 \\ + 214 \\ \hline \end{array}$$

$$\begin{array}{r} 31. \quad 659 \\ + 338 \\ \hline \end{array}$$

$$\begin{array}{r} 32. \quad 452 \\ + 434 \\ \hline \end{array}$$

$$\begin{array}{r} 33. \quad 323 \\ + 150 \\ \hline \end{array}$$

$$\begin{array}{r} 34. \quad 138 \\ + 226 \\ \hline \end{array}$$

$$\begin{array}{r} 35. \quad 337 \\ + 510 \\ \hline \end{array}$$

$$\begin{array}{r} 36. \quad 183 \\ + 529 \\ \hline \end{array}$$

$$\begin{array}{r} 37. \quad 346 \\ + 379 \\ \hline \end{array}$$

$$\begin{array}{r} 38. \quad 412 \\ + 180 \\ \hline \end{array}$$

$$\begin{array}{r} 39. \quad 240 \\ + 455 \\ \hline \end{array}$$

$$\begin{array}{r} 40. \quad 709 \\ + 190 \\ \hline \end{array}$$

1. Ařađıda toplamı iřlemlerini yapalım.

$$\begin{array}{r} 1. \quad 751 \\ + 119 \\ \hline \end{array}$$

$$\begin{array}{r} 2. \quad 462 \\ + 426 \\ \hline \end{array}$$

$$\begin{array}{r} 3. \quad 316 \\ + 526 \\ \hline \end{array}$$

$$\begin{array}{r} 4. \quad 415 \\ + 580 \\ \hline \end{array}$$

$$\begin{array}{r} 5. \quad 701 \\ + 257 \\ \hline \end{array}$$

$$\begin{array}{r} 6. \quad 849 \\ + 101 \\ \hline \end{array}$$

$$\begin{array}{r} 7. \quad 183 \\ + 465 \\ \hline \end{array}$$

$$\begin{array}{r} 8. \quad 663 \\ + 179 \\ \hline \end{array}$$

$$\begin{array}{r} 9. \quad 428 \\ + 221 \\ \hline \end{array}$$

$$\begin{array}{r} 10. \quad 130 \\ + 541 \\ \hline \end{array}$$

$$\begin{array}{r} 11. \quad 161 \\ + 271 \\ \hline \end{array}$$

$$\begin{array}{r} 12. \quad 519 \\ + 115 \\ \hline \end{array}$$

$$\begin{array}{r} 13. \quad 537 \\ + 127 \\ \hline \end{array}$$

$$\begin{array}{r} 14. \quad 235 \\ + 553 \\ \hline \end{array}$$

$$\begin{array}{r} 15. \quad 108 \\ + 123 \\ \hline \end{array}$$

$$\begin{array}{r} 16. \quad 347 \\ + 176 \\ \hline \end{array}$$

$$\begin{array}{r} 17. \quad 118 \\ + 727 \\ \hline \end{array}$$

$$\begin{array}{r} 18. \quad 535 \\ + 154 \\ \hline \end{array}$$

$$\begin{array}{r} 19. \quad 232 \\ + 222 \\ \hline \end{array}$$

$$\begin{array}{r} 20. \quad 197 \\ + 779 \\ \hline \end{array}$$

$$\begin{array}{r} 21. \quad 211 \\ + 187 \\ \hline \end{array}$$

$$\begin{array}{r} 22. \quad 782 \\ + 142 \\ \hline \end{array}$$

$$\begin{array}{r} 23. \quad 517 \\ + 307 \\ \hline \end{array}$$

$$\begin{array}{r} 24. \quad 515 \\ + 233 \\ \hline \end{array}$$

$$\begin{array}{r} 25. \quad 190 \\ + 379 \\ \hline \end{array}$$

$$\begin{array}{r} 26. \quad 509 \\ + 206 \\ \hline \end{array}$$

$$\begin{array}{r} 27. \quad 292 \\ + 238 \\ \hline \end{array}$$

$$\begin{array}{r} 28. \quad 161 \\ + 525 \\ \hline \end{array}$$

$$\begin{array}{r} 29. \quad 346 \\ + 454 \\ \hline \end{array}$$

$$\begin{array}{r} 30. \quad 118 \\ + 761 \\ \hline \end{array}$$

$$\begin{array}{r} 31. \quad 355 \\ + 166 \\ \hline \end{array}$$

$$\begin{array}{r} 32. \quad 370 \\ + 113 \\ \hline \end{array}$$

$$\begin{array}{r} 33. \quad 247 \\ + 264 \\ \hline \end{array}$$

$$\begin{array}{r} 34. \quad 494 \\ + 428 \\ \hline \end{array}$$

$$\begin{array}{r} 35. \quad 273 \\ + 690 \\ \hline \end{array}$$

$$\begin{array}{r} 36. \quad 396 \\ + 101 \\ \hline \end{array}$$

$$\begin{array}{r} 37. \quad 230 \\ + 290 \\ \hline \end{array}$$

$$\begin{array}{r} 38. \quad 257 \\ + 496 \\ \hline \end{array}$$

$$\begin{array}{r} 39. \quad 119 \\ + 479 \\ \hline \end{array}$$

$$\begin{array}{r} 40. \quad 269 \\ + 280 \\ \hline \end{array}$$