



VERİLMİYEN TOPLANAN


👉 Robotların üzerinde yazılmış olan toplamlara ulaşmak için kutucuklardaki verilmeyen sayıları bulunuz.

$$\begin{array}{l} \boxed{6} + 7 \\ 5 + \boxed{\quad} \\ \boxed{\quad} + 9 \end{array}$$



13

$$\begin{array}{l} \boxed{\quad} + 2 \\ 8 + \boxed{\quad} \\ \boxed{\quad} + 4 \end{array}$$



10

$$\begin{array}{l} \boxed{\quad} + 9 \\ 8 + \boxed{\quad} \\ \boxed{\quad} + 3 \end{array}$$



11

$$\begin{array}{l} \boxed{\quad} + 7 \\ 6 + \boxed{\quad} \\ \boxed{\quad} + 8 \end{array}$$



15

$$\begin{array}{l} \boxed{\quad} + 3 \\ 9 + \boxed{\quad} \\ \boxed{\quad} + 6 \end{array}$$



12

$$\begin{array}{l} \boxed{\quad} + 8 \\ 7 + \boxed{\quad} \\ \boxed{\quad} + 9 \end{array}$$



16

$$\begin{array}{l} \boxed{\quad} + 6 \\ 8 + \boxed{\quad} \\ \boxed{\quad} + 7 \end{array}$$



14

$$\begin{array}{l} \boxed{\quad} + 2 \\ 4 + \boxed{\quad} \\ \boxed{\quad} + 5 \end{array}$$


9

$$\begin{array}{l} \boxed{\quad} + 3 \\ 6 + \boxed{\quad} \\ \boxed{\quad} + 1 \end{array}$$


7

$$\begin{array}{l} \boxed{\quad} + 5 \\ 3 + \boxed{\quad} \\ \boxed{\quad} + 2 \end{array}$$


8