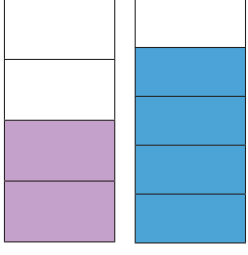


# KESİRLERİ KARŞILAŞTIRMA

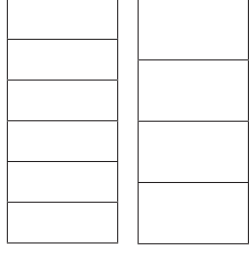
● Aşağıda aynı büyüklükte verilen bütünlerin belirtilen kesir kadarını boyayınız. Bu kesirlerden büyük olanını örnekteki gibi işaretleyiniz



$$\frac{2}{4}$$




$$\frac{4}{5}$$



$$\frac{2}{6}$$




$$\frac{3}{4}$$



$$\frac{2}{3}$$




$$\frac{4}{7}$$



$$\frac{2}{4}$$




$$\frac{4}{5}$$



$$\frac{4}{9}$$




$$\frac{2}{6}$$



$$\frac{2}{7}$$




$$\frac{1}{5}$$



$$\frac{3}{5}$$



$$\frac{5}{6}$$




$$\frac{3}{8}$$



$$\frac{2}{4}$$




● Aşağıda aynı büyüklükte verilen bütünlerin belirtilen kesir kadarını boyayınız. Bu kesirlerden küçük olanını işaretleyiniz.



$$\frac{3}{4}$$




$$\frac{3}{5}$$



$$\frac{2}{7}$$




$$\frac{4}{8}$$



$$\frac{1}{6}$$




$$\frac{3}{5}$$



$$\frac{3}{4}$$




$$\frac{5}{6}$$



$$\frac{2}{8}$$




$$\frac{1}{5}$$



$$\frac{3}{7}$$




$$\frac{3}{5}$$



$$\frac{1}{4}$$



$$\frac{3}{6}$$



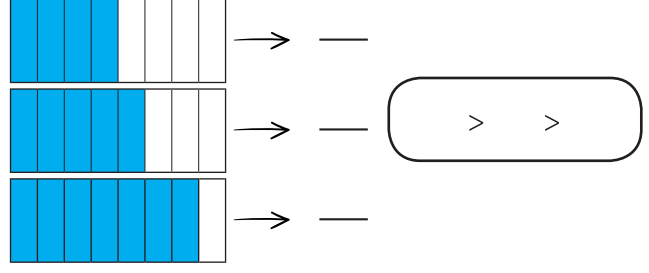
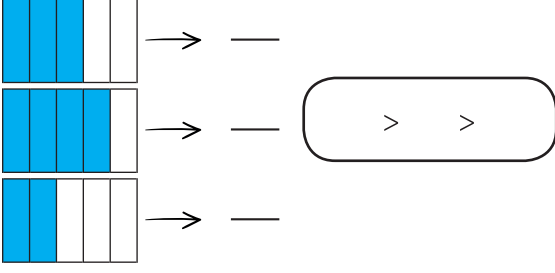
$$\frac{4}{9}$$



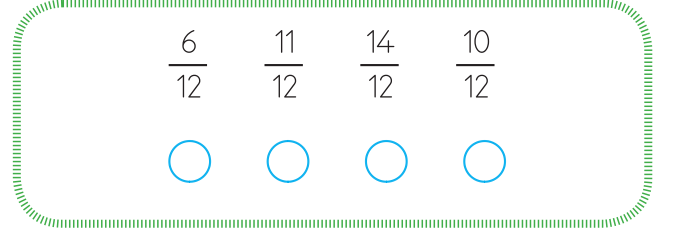
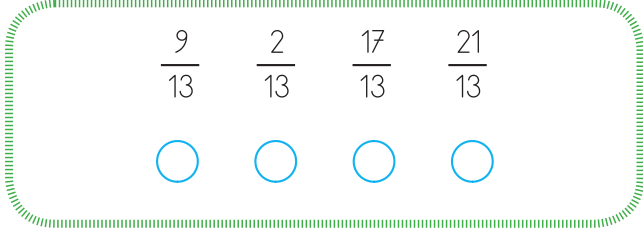
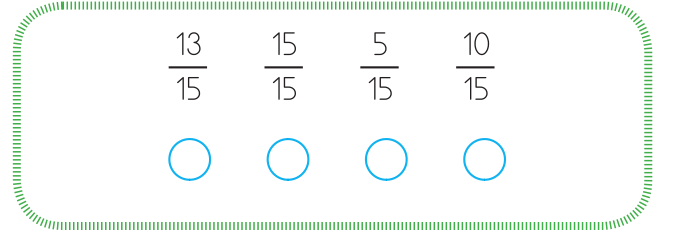
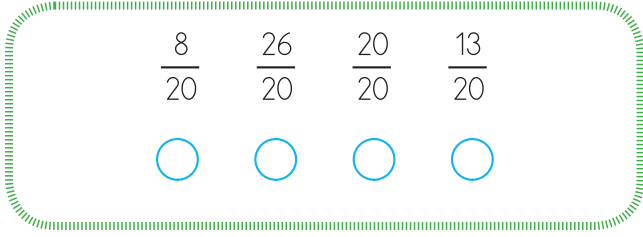
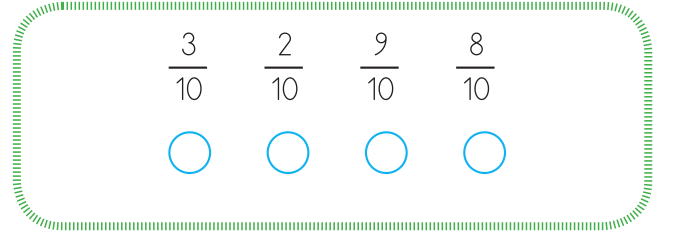
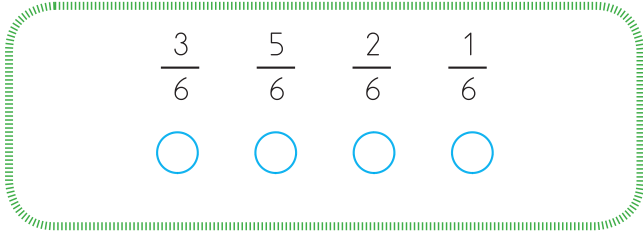
$$\frac{2}{3}$$



● Aşağıdaki paydaları eşit olan modellenmiş kesirleri yazınız. Sembol kullanarak büyükten küçüğe doğru sıralayınız.



● Aşağıdaki kesirlerden en büyük olanını işaretleyiniz.



● Aşağıdaki kesirlerden en küçük olanını işaretleyiniz.

