

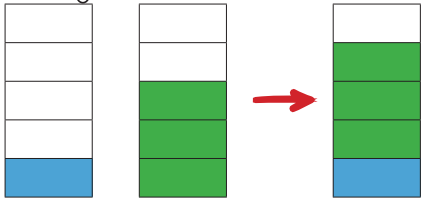
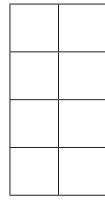

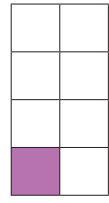


KESİRLERDE TOPLAMA İŞLEMİ



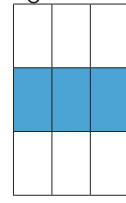
● Aşağıda modellenen kesirleri yazınız. Kesirleri toplayıp örnekteki gibi model üzerinde gösteriniz.



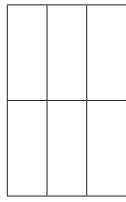
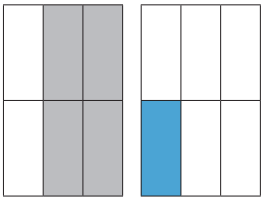
$$\frac{1}{5} + \frac{3}{5} = \frac{4}{5}$$



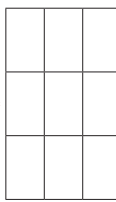

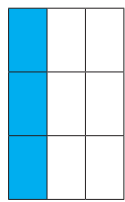
$$\frac{1}{6} + \frac{2}{6} = \frac{3}{6}$$



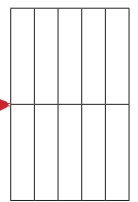
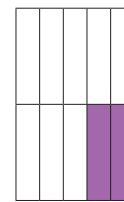
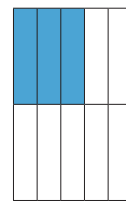
$$\frac{2}{6} + \frac{2}{6} = \frac{4}{6}$$



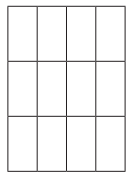
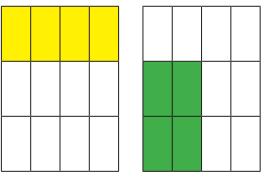
$$\frac{2}{6} + \frac{1}{6} = \frac{3}{6}$$



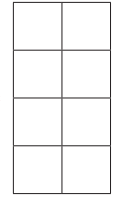
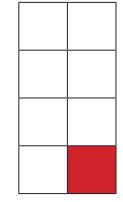
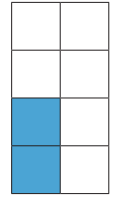
$$\frac{2}{6} + \frac{2}{6} = \frac{4}{6}$$



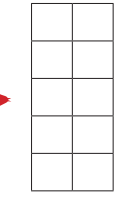
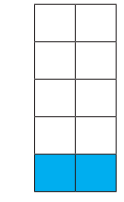
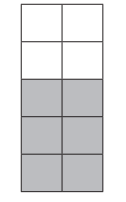
$$\frac{2}{6} + \frac{1}{6} = \frac{3}{6}$$



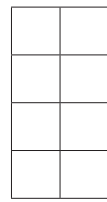
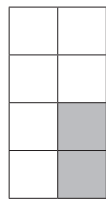

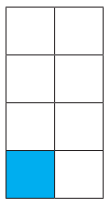
$$\frac{2}{6} + \frac{2}{6} = \frac{4}{6}$$




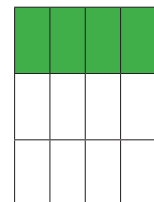
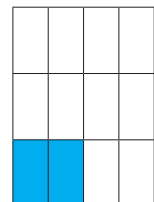
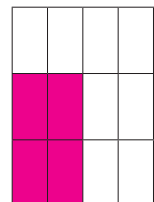
$$\frac{2}{6} + \frac{1}{6} = \frac{3}{6}$$



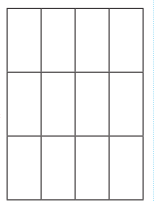
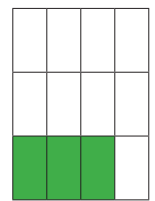
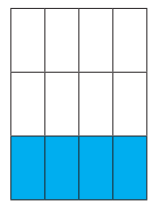
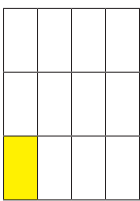
$$\frac{2}{6} + \frac{2}{6} = \frac{4}{6}$$




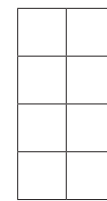
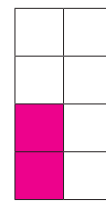
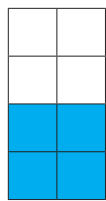
$$\frac{1}{6} + \frac{2}{6} + \frac{1}{6} = \frac{4}{6}$$



$$\frac{2}{6} + \frac{2}{6} + \frac{2}{6} = \frac{6}{6}$$



$$\frac{1}{6} + \frac{2}{6} + \frac{2}{6} = \frac{5}{6}$$



$$\frac{2}{6} + \frac{2}{6} + \frac{2}{6} = \frac{6}{6}$$

● Aşağıdaki toplama işlemlerini örnekteki gibi yapınız.

$$\frac{4}{7} + \frac{1}{7} \rightarrow \frac{4+1}{7} = \frac{5}{7}$$

$$\frac{3}{9} + \frac{2}{9} \rightarrow \frac{\dots+\dots}{\dots} = \frac{\dots}{\dots}$$

$$\frac{21}{50} + \frac{17}{50} \rightarrow \frac{\dots+\dots}{\dots} = \frac{\dots}{\dots}$$

$$\frac{9}{11} + \frac{2}{11} \rightarrow \frac{\dots+\dots}{\dots} = \frac{\dots}{\dots}$$

$$\frac{44}{85} + \frac{42}{85} \rightarrow \frac{\dots+\dots}{\dots} = \frac{\dots}{\dots}$$

$$\frac{33}{50} + \frac{17}{50} \rightarrow \frac{\dots+\dots}{\dots} = \frac{\dots}{\dots}$$

$$\frac{36}{64} + \frac{28}{64} \rightarrow \frac{\dots+\dots}{\dots} = \frac{\dots}{\dots}$$

$$\frac{5}{13} + \frac{5}{13} + \frac{1}{13} \rightarrow \frac{\dots+\dots+\dots}{\dots} = \frac{\dots}{\dots}$$

$$\frac{23}{99} + \frac{17}{99} + \frac{36}{99} \rightarrow \frac{\dots+\dots+\dots}{\dots} = \frac{\dots}{\dots}$$

$$\frac{11}{77} + \frac{12}{77} + \frac{13}{77} \rightarrow \frac{\dots+\dots+\dots}{\dots} = \frac{\dots}{\dots}$$

$$\frac{2}{9} + \frac{3}{9} + \frac{4}{9} \rightarrow \frac{\dots+\dots+\dots}{\dots} = \frac{\dots}{\dots}$$

● Aşağıdaki verilen toplama işlemlerini örnekteki gibi eşleştiriniz.

$$\frac{21}{60} + \frac{24}{60} = \frac{45}{60}$$

$$\frac{83}{70}$$

$$\frac{3}{14} + \frac{9}{14} = \frac{\dots}{\dots}$$

$$\frac{45}{43}$$

$$\frac{34}{70} + \frac{49}{70} = \frac{\dots}{\dots}$$

$$\frac{28}{70}$$

$$\frac{35}{43} + \frac{8}{43} = \frac{\dots}{\dots}$$

$$\frac{45}{60}$$

$$\frac{27}{55} + \frac{27}{55} = \frac{\dots}{\dots}$$

$$\frac{14}{12}$$

$$\frac{16}{43} + \frac{29}{43} = \frac{\dots}{\dots}$$

$$\frac{43}{43}$$

$$\frac{9}{70} + \frac{19}{70} = \frac{\dots}{\dots}$$

$$\frac{55}{54}$$

$$\frac{43}{54} + \frac{12}{54} = \frac{\dots}{\dots}$$

$$\frac{54}{55}$$

$$\frac{10}{12} + \frac{4}{12} = \frac{\dots}{\dots}$$

$$\frac{12}{14}$$

ilkokul.com