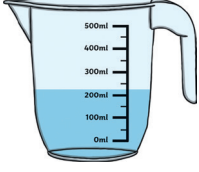


● Aşağıdaki dereceli silindirlerin içerisinde olan sıvıların hacimlerini madde içine atılmadan ve atıldıktan sonra ölçerek yazalım.



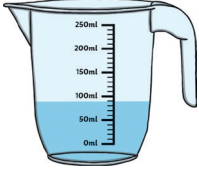
Suyun ilk hacmi 220 mL



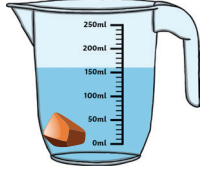
Suyun son hacmi 300 mL



Taşın hacmi :



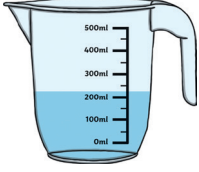
Suyun ilk hacmi 90 mL



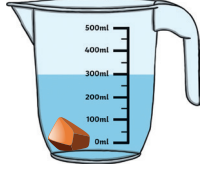
Suyun son hacmi 160 mL



Taşın hacmi :



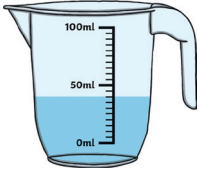
Suyun ilk hacmi 220 mL



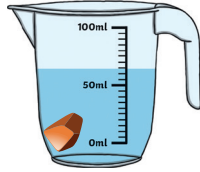
Suyun son hacmi 300 mL



Taşın hacmi :



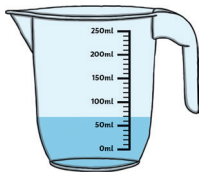
Suyun ilk hacmi 40 mL



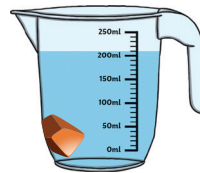
Suyun son hacmi 65 mL



Taşın hacmi :



Suyun ilk hacmi 70 mL



Suyun son hacmi 210 mL



Taşın hacmi :