

















Konu: Toplama İşlemi




Adım-Soyadım:




👉 Aşağıdaki görseller sayıları ifade etmektedir. Görselleri kullanarak işlemleri örnekteki gibi yapalım.

 = 1	 = 2	 = 6
 = 7	 = 4	 = 9
 = 5	 = 8	 = 3




 +  =  $5 + 3 = 8$ 




 +  = 

 +  = 




 +  = 




 +  = 




 +  = 




 +  = 




 +  = 




 +  = 

 +  = 

 +  = 

 +  = 

 +  = 

 +  = 

Konu: Toplama İşlemi

Adım-Soyadım:

👉 Aşağıdaki toplama işlemlerinden doğru olanlara D, yanlış olanlara Y yazınız.

11 + 4 = 14

12 + 3 = 15

10 + 6 = 16

6 + 7 = 14

8 + 7 = 15

10 + 8 = 18

9 + 3 = 13

5 + 9 = 13

14 + 5 = 20

8 + 4 = 12

👉 Aşağıdaki toplama işlemlerinden doğru olanlara D, yanlış olanlara Y yazınız.

$$\begin{array}{r} 3 \\ + 6 \\ \hline \dots \end{array}$$

$$\begin{array}{r} 8 \\ + 9 \\ \hline \dots \end{array}$$

$$\begin{array}{r} 8 \\ + 2 \\ \hline \dots \end{array}$$

$$\begin{array}{r} 12 \\ + 5 \\ \hline \dots \end{array}$$

$$\begin{array}{r} 4 \\ + 7 \\ \hline \dots \end{array}$$

$$\begin{array}{r} 3 \\ + 5 \\ \hline \dots \end{array}$$

$$\begin{array}{r} 6 \\ + 5 \\ \hline \dots \end{array}$$

$$\begin{array}{r} 13 \\ + 6 \\ \hline \dots \end{array}$$

$$\begin{array}{r} 17 \\ + 2 \\ \hline \dots \end{array}$$

$$\begin{array}{r} 6 \\ + 9 \\ \hline \dots \end{array}$$

$$\begin{array}{r} 5 \\ + 5 \\ \hline \dots \end{array}$$

$$\begin{array}{r} 10 \\ + 4 \\ \hline \dots \end{array}$$

$$\begin{array}{r} 8 \\ + 8 \\ \hline \dots \end{array}$$

$$\begin{array}{r} 6 \\ + 7 \\ \hline \dots \end{array}$$

$$\begin{array}{r} 9 \\ + 2 \\ \hline \dots \end{array}$$

👉 Toplama işlemlerinin sonuçlarına göre resmi boyayalım.

17



19




10



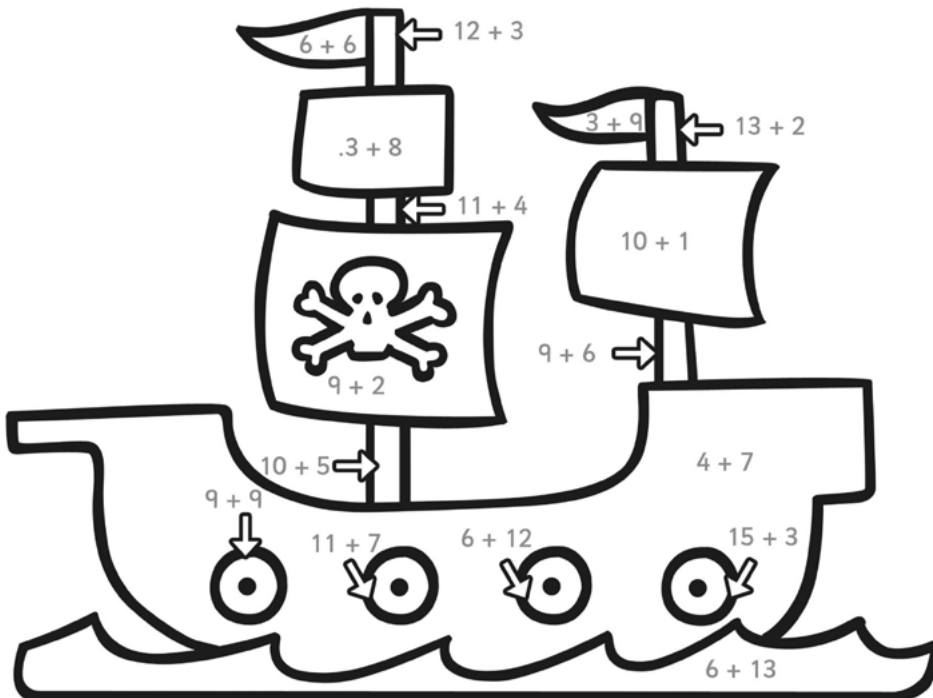
20



16



👉 Toplama işlemlerinin sonuçlarına göre resmi boyayalım.



18



19



15



11



12



Konu: Toplama İşlemi

Adım-Soyadım:

👉 Çiçeklerin üzerindeki işlemleri yapalım. Bulduğunuz sonuçlara göre çiçeklerin yapraklarını uygun renklerle boyayalım.

$$\begin{array}{r} 12 \\ + 5 \\ \hline \dots \end{array}$$

$$\begin{array}{r} 8 \\ + 7 \\ \hline \dots \end{array}$$

$$\begin{array}{r} 6 \\ + 2 \\ \hline \dots \end{array}$$

$$\begin{array}{r} 14 \\ + 6 \\ \hline \dots \end{array}$$

$$\begin{array}{r} 11 \\ + 5 \\ \hline \dots \end{array}$$

$$\begin{array}{r} 9 \\ + 5 \\ \hline \dots \end{array}$$

17 →  15 →  8 →  20 →  16 →  14 → 

👉 Aşağıdaki toplama işlemlerini yapalım.

$$\begin{array}{r} 3 \\ 5 \\ + 4 \\ \hline \dots \end{array}$$

$$\begin{array}{r} 7 \\ 1 \\ + 6 \\ \hline \dots \end{array}$$

$$\begin{array}{r} 4 \\ 3 \\ + 3 \\ \hline \dots \end{array}$$

$$\begin{array}{r} 6 \\ 9 \\ + 2 \\ \hline \dots \end{array}$$

$$\begin{array}{r} 3 \\ 7 \\ + 4 \\ \hline \dots \end{array}$$

$$\begin{array}{r} 8 \\ 3 \\ + 2 \\ \hline \dots \end{array}$$

$$\begin{array}{r} 4 \\ 8 \\ + 2 \\ \hline \dots \end{array}$$

$$\begin{array}{r} 7 \\ 2 \\ + 4 \\ \hline \dots \end{array}$$

$$\begin{array}{r} 6 \\ 5 \\ + 4 \\ \hline \dots \end{array}$$

$$\begin{array}{r} 4 \\ 6 \\ + 2 \\ \hline \dots \end{array}$$

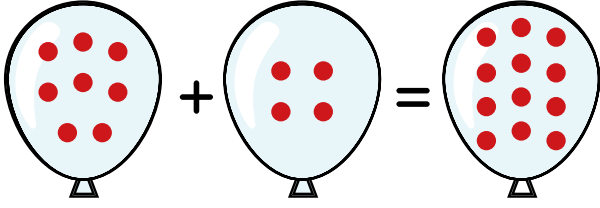
$$\begin{array}{r} 2 \\ 3 \\ + 4 \\ \hline \dots \end{array}$$

$$\begin{array}{r} 5 \\ 5 \\ + 5 \\ \hline \dots \end{array}$$

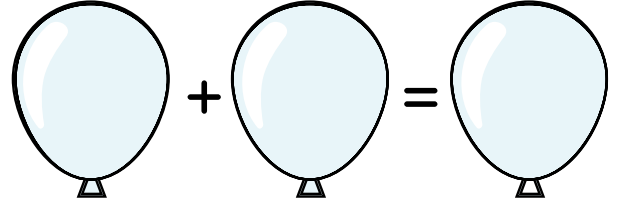
Konu: Toplama İşlemi

Adım-Soyadım:

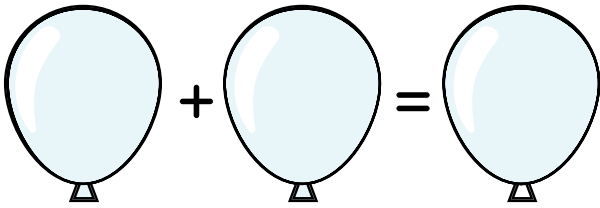
👉 Aşağıdaki işlemlere uygun olarak balonların üzerine örnekteki gibi noktalar yapalım. Ardından noktaları toplayıp işlemi yapalım.



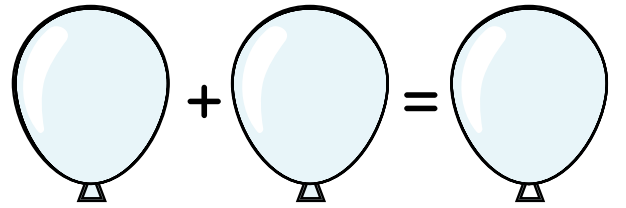
$$8 + 4 = 12$$



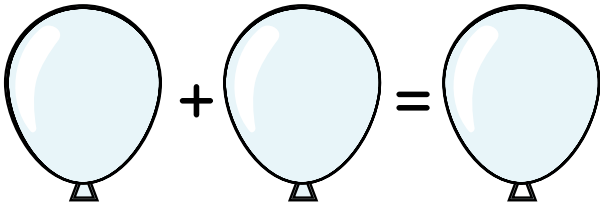
$$6 + 5 = \dots\dots\dots$$



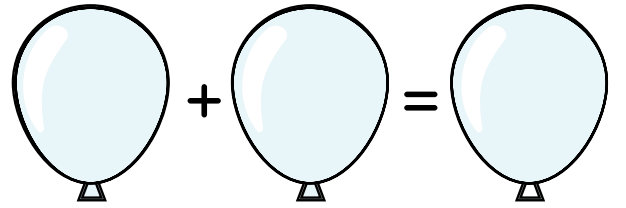
$$4 + 3 = \dots\dots\dots$$



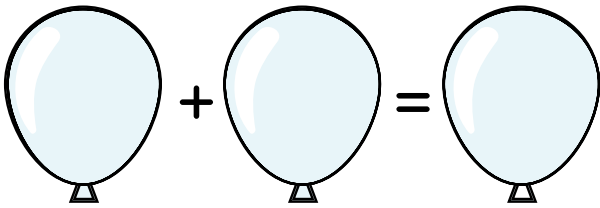
$$7 + 2 = \dots\dots\dots$$



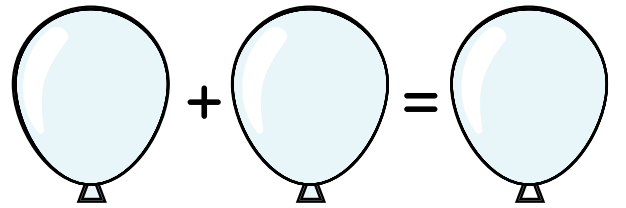
$$4 + 6 = \dots\dots\dots$$



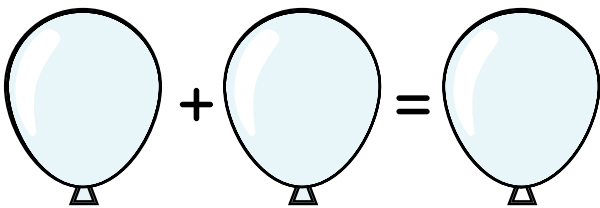
$$5 + 5 = \dots\dots\dots$$



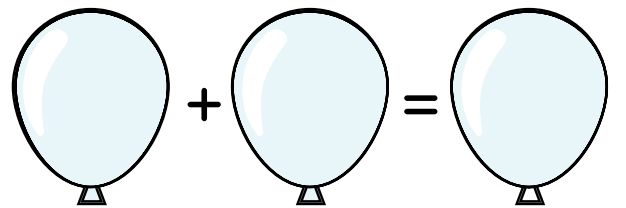
$$3 + 4 = \dots\dots\dots$$



$$5 + 2 = \dots\dots\dots$$



$$8 + 3 = \dots\dots\dots$$



$$1 + 9 = \dots\dots\dots$$


TOPLA VE BOYA

10 = Kırmızı

8 = Pembe

6 = Yeşil

4 = Gri



TOPLA VE BOYA

10 = Sarı

9 = Yeşil

8 = Turuncu

7 = Mor

