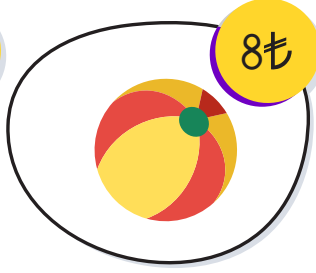
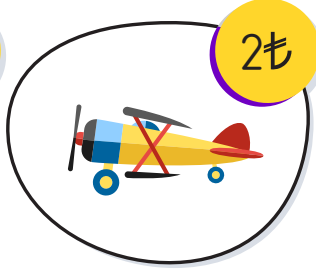
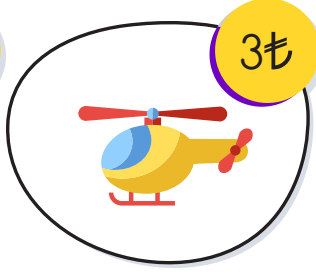
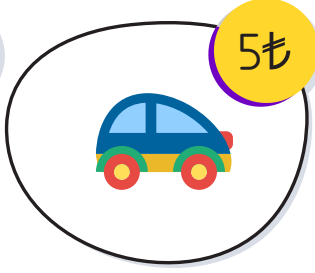
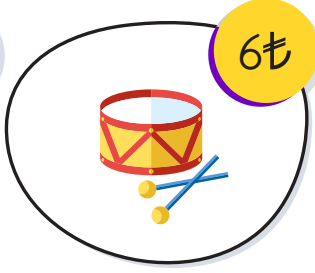



# ALIŞVERİŞ ZAMANI

Aşağıdaki oyuncakların fiyatlarını inceleyip soruları yanıtlayınız.



$$\text{Train} + \text{Helicopter} = \dots \text{ TL}$$

$$\text{Helicopter} + \text{Drum} = \dots \text{ TL}$$

$$\text{Airplane} + \text{Car} = \dots \text{ TL}$$

$$\text{Drum} + \text{Airplane} = \dots \text{ TL}$$

$$\text{Train} + \text{Car} = \dots \text{ TL}$$

$$\text{Train} + \text{Train} = \dots \text{ TL}$$

$$\text{Car} + \text{Helicopter} = \dots \text{ TL}$$

$$\text{Airplane} + \text{Beach Ball} = \dots \text{ TL}$$

$$\text{Car} + \text{Beach Ball} = \dots \text{ TL}$$

$$\text{Beach Ball} + \text{Train} = \dots \text{ TL}$$

$$\text{Car} + \text{Helicopter} = \dots \text{ TL}$$

$$\text{Helicopter} + \text{Airplane} = \dots \text{ TL}$$