


AÇILAR

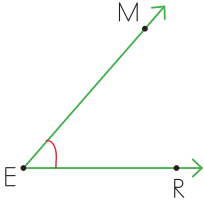


- ⇒ Açının köşe ve kenarları büyük harfle isimlendirilir.
- ⇒ Açının köşesine yazılacak olan büyük harflerle isimlendirilir. Açı " ^ " sembolü kullanılarak isimlendirilir.

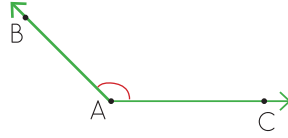
● Aşağıdaki açının kenar ve köşelerini yazalım.



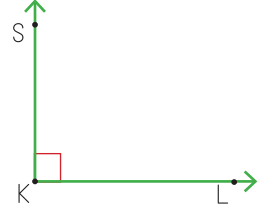
● Aşağıdaki açının kenar ve köşelerini örnekteki gibi yazınız.



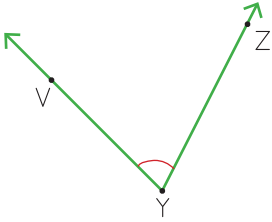
- 1 E köşesi
- 2 EM ışını
- 3 ER ışını



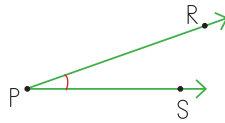
- 1
- 2
- 3



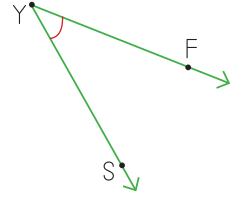
- 1
- 2
- 3



- 1
- 2
- 3



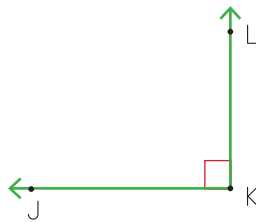
- 1
- 2
- 3



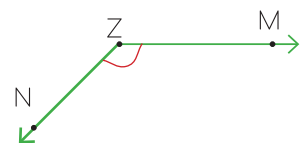
- 1
- 2
- 3



- 1
- 2
- 3

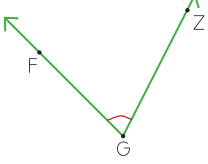
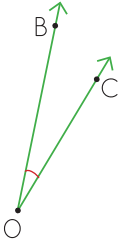
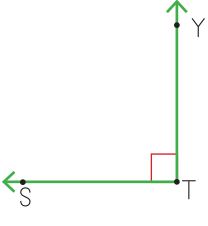
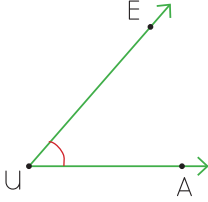
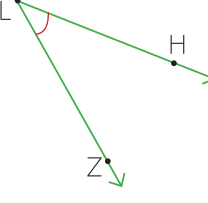
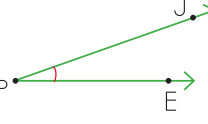


- 1
- 2
- 3



- 1
- 2
- 3

● Aşağıdaki açıları örnekteki gibi isimlendiriniz. Sembolle gösteriniz.

	Açıyı İsimlendirelim	Sembolle Gösterelim
	FGZ açısı ZGF açısı G açısı	\widehat{FGZ} \widehat{ZGF} \widehat{C}
		
		
		
		
		

● Aşağıdaki açıları isimlendirerek sembole göstereyim.

