




5. Aşağıdaki abaküslerde modellenen sayıların onluklarını ve birliklerini yazalım.




Onluk	Birlik
3	8
38	
Otuz sekiz	




Onluk	Birlik




Onluk	Birlik



Onluk	Birlik



Onluk	Birlik



Onluk	Birlik

6. Aşağıda verilen sayıları abaküsler üzerinde modelleyerek gösterelim.



Onluk	Birlik
29	



Onluk	Birlik
46	



Onluk	Birlik
64	



Onluk	Birlik
72	



Onluk	Birlik
51	



Onluk	Birlik
19	



Onluk	Birlik
23	



Onluk	Birlik
77	