



İki basamaklı sayılarla toplama işlemi yapılırken önce birler basamağındaki sayıları toplarız.

• Bulduğumuz sonuç 9'dan büyük (iki basamaklı) olursa elde ettiğimiz sayının birler basamağındaki rakamı olduğu gibi yazarız.

• Onluğu ise "1 onluk" olarak onlar basamağına ekleriz.

1. Aşağıdaki toplama işlemlerini örnekteki gibi yapalım..

$$\begin{array}{r} 27 \\ + 46 \\ \hline 73 \end{array}$$

2 onluk + 7 birlik  
+ 4 onluk + 6 birlik  
7 onluk + 0 3 birlik

$$\begin{array}{r} 52 \\ + 19 \\ \hline \dots\dots \end{array}$$

0  
... onluk + ... birlik  
+ ... onluk + ... birlik  
... onluk + 0 ... birlik

$$\begin{array}{r} 39 \\ + 14 \\ \hline \dots\dots \end{array}$$

0  
... onluk + ... birlik  
+ ... onluk + ... birlik  
... onluk + 0 ... birlik

$$\begin{array}{r} 28 \\ + 17 \\ \hline \dots\dots \end{array}$$

0  
... onluk + ... birlik  
+ ... onluk + ... birlik  
... onluk + 0 ... birlik

$$\begin{array}{r} 46 \\ + 24 \\ \hline \dots\dots \end{array}$$

0  
... onluk + ... birlik  
+ ... onluk + ... birlik  
... onluk + 0 ... birlik

$$\begin{array}{r} 18 \\ + 33 \\ \hline \dots\dots \end{array}$$

0  
... onluk + ... birlik  
+ ... onluk + ... birlik  
... onluk + 0 ... birlik

$$\begin{array}{r} 56 \\ + 26 \\ \hline \dots\dots \end{array}$$

0  
... onluk + ... birlik  
+ ... onluk + ... birlik  
... onluk + 0 ... birlik

$$\begin{array}{r} 35 \\ + 39 \\ \hline \dots\dots \end{array}$$

0  
... onluk + ... birlik  
+ ... onluk + ... birlik  
... onluk + 0 ... birlik

$$\begin{array}{r} 23 \\ + 39 \\ \hline \dots\dots \end{array}$$

0  
... onluk + ... birlik  
+ ... onluk + ... birlik  
... onluk + 0 ... birlik

$$\begin{array}{r} 12 \\ + 58 \\ \hline \dots\dots \end{array}$$

0  
... onluk + ... birlik  
+ ... onluk + ... birlik  
... onluk + 0 ... birlik

1. Aşağıdaki toplama işlemlerini yapalım.

$$\begin{array}{r} \text{O} \\ 28 \\ + 35 \\ \hline \text{.....} \end{array}$$

$$\begin{array}{r} \text{O} \\ 13 \\ + 39 \\ \hline \text{.....} \end{array}$$

$$\begin{array}{r} \text{O} \\ 52 \\ + 19 \\ \hline \text{.....} \end{array}$$

$$\begin{array}{r} \text{O} \\ 34 \\ + 47 \\ \hline \text{.....} \end{array}$$

$$\begin{array}{r} \text{O} \\ 14 \\ + 58 \\ \hline \text{.....} \end{array}$$

$$\begin{array}{r} \text{O} \\ 27 \\ + 63 \\ \hline \text{.....} \end{array}$$

$$\begin{array}{r} \text{O} \\ 34 \\ + 18 \\ \hline \text{.....} \end{array}$$

$$\begin{array}{r} \text{O} \\ 36 \\ + 24 \\ \hline \text{.....} \end{array}$$

$$\begin{array}{r} \text{O} \\ 35 \\ + 19 \\ \hline \text{.....} \end{array}$$

$$\begin{array}{r} \text{O} \\ 53 \\ + 37 \\ \hline \text{.....} \end{array}$$

$$\begin{array}{r} \text{O} \\ 12 \\ + 59 \\ \hline \text{.....} \end{array}$$

$$\begin{array}{r} \text{O} \\ 41 \\ + 29 \\ \hline \text{.....} \end{array}$$

$$\begin{array}{r} \text{O} \\ 34 \\ + 17 \\ \hline \text{.....} \end{array}$$

$$\begin{array}{r} \text{O} \\ 13 \\ + 38 \\ \hline \text{.....} \end{array}$$

$$\begin{array}{r} \text{O} \\ 79 \\ + 15 \\ \hline \text{.....} \end{array}$$

$$\begin{array}{r} \text{O} \\ 34 \\ + 27 \\ \hline \text{.....} \end{array}$$

$$\begin{array}{r} \text{O} \\ 44 \\ + 36 \\ \hline \text{.....} \end{array}$$

$$\begin{array}{r} \text{O} \\ 34 \\ + 47 \\ \hline \text{.....} \end{array}$$

$$\begin{array}{r} \text{O} \\ 23 \\ + 38 \\ \hline \text{.....} \end{array}$$

$$\begin{array}{r} \text{O} \\ 15 \\ + 65 \\ \hline \text{.....} \end{array}$$

$$\begin{array}{r} \text{O} \\ 33 \\ + 29 \\ \hline \text{.....} \end{array}$$

$$\begin{array}{r} \text{O} \\ 45 \\ + 25 \\ \hline \text{.....} \end{array}$$

$$\begin{array}{r} \text{O} \\ 36 \\ + 9 \\ \hline \text{.....} \end{array}$$

$$\begin{array}{r} \text{O} \\ 37 \\ + 57 \\ \hline \text{.....} \end{array}$$

$$\begin{array}{r} \text{O} \\ 35 \\ + 15 \\ \hline \text{.....} \end{array}$$

$$\begin{array}{r} \text{O} \\ 45 \\ + 18 \\ \hline \text{.....} \end{array}$$

$$\begin{array}{r} \text{O} \\ 34 \\ + 49 \\ \hline \text{.....} \end{array}$$

$$\begin{array}{r} \text{O} \\ 46 \\ + 8 \\ \hline \text{.....} \end{array}$$

$$\begin{array}{r} \text{O} \\ 24 \\ + 37 \\ \hline \text{.....} \end{array}$$

$$\begin{array}{r} \text{O} \\ 28 \\ + 36 \\ \hline \text{.....} \end{array}$$

$$\begin{array}{r} \text{O} \\ 16 \\ + 58 \\ \hline \text{.....} \end{array}$$

$$\begin{array}{r} \text{O} \\ 43 \\ + 39 \\ \hline \text{.....} \end{array}$$

$$\begin{array}{r} \text{O} \\ 14 \\ + 57 \\ \hline \text{.....} \end{array}$$

$$\begin{array}{r} \text{O} \\ 36 \\ + 17 \\ \hline \text{.....} \end{array}$$

$$\begin{array}{r} \text{O} \\ 49 \\ + 11 \\ \hline \text{.....} \end{array}$$

$$\begin{array}{r} \text{O} \\ 48 \\ + 9 \\ \hline \text{.....} \end{array}$$

$$\begin{array}{r} \text{O} \\ 55 \\ + 27 \\ \hline \text{.....} \end{array}$$

$$\begin{array}{r} \text{O} \\ 23 \\ + 28 \\ \hline \text{.....} \end{array}$$

$$\begin{array}{r} \text{O} \\ 19 \\ + 62 \\ \hline \text{.....} \end{array}$$

$$\begin{array}{r} \text{O} \\ 73 \\ + 17 \\ \hline \text{.....} \end{array}$$

$$\begin{array}{r} \text{O} \\ 27 \\ + 28 \\ \hline \text{.....} \end{array}$$

$$\begin{array}{r} \text{O} \\ 25 \\ + 57 \\ \hline \text{.....} \end{array}$$

$$\begin{array}{r} \text{O} \\ 39 \\ + 9 \\ \hline \text{.....} \end{array}$$

$$\begin{array}{r} \text{O} \\ 47 \\ + 8 \\ \hline \text{.....} \end{array}$$

$$\begin{array}{r} \text{O} \\ 34 \\ + 6 \\ \hline \text{.....} \end{array}$$

$$\begin{array}{r} \text{O} \\ 74 \\ + 8 \\ \hline \text{.....} \end{array}$$

$$\begin{array}{r} \text{O} \\ 63 \\ + 9 \\ \hline \text{.....} \end{array}$$

$$\begin{array}{r} \text{O} \\ 88 \\ + 5 \\ \hline \text{.....} \end{array}$$

$$\begin{array}{r} \text{O} \\ 87 \\ + 9 \\ \hline \text{.....} \end{array}$$

1. Aşağıdaki toplama işlemlerini yapalım.

|       |                          |   |  |    |                          |   |  |    |                          |   |  |    |                          |   |  |    |                          |   |  |
|-------|--------------------------|---|--|----|--------------------------|---|--|----|--------------------------|---|--|----|--------------------------|---|--|----|--------------------------|---|--|
| a.    | <input type="checkbox"/> |   |  | b. | <input type="checkbox"/> |   |  | c. | <input type="checkbox"/> |   |  | ç. | <input type="checkbox"/> |   |  | d. | <input type="checkbox"/> |   |  |
|       | 3                        | 5 |  |    | 2                        | 8 |  |    | 1                        | 6 |  |    | 2                        | 8 |  |    | 2                        | 9 |  |
|       | 1                        | 5 |  |    | 3                        | 3 |  |    | 3                        | 3 |  |    | 1                        | 4 |  |    | 2                        | 0 |  |
| +     | 2                        | 1 |  | +  | 2                        | 4 |  | +  | 2                        | 4 |  | +  | 5                        | 6 |  | +  | 3                        | 6 |  |
| <hr/> |                          |   |  |    |                          |   |  |    |                          |   |  |    |                          |   |  |    |                          |   |  |
| e.    | <input type="checkbox"/> |   |  | f. | <input type="checkbox"/> |   |  | g. | <input type="checkbox"/> |   |  | ğ. | <input type="checkbox"/> |   |  | h. | <input type="checkbox"/> |   |  |
|       | 1                        | 4 |  |    | 2                        | 2 |  |    | 1                        | 8 |  |    | 1                        | 3 |  |    | 4                        | 2 |  |
|       | 2                        | 9 |  |    | 3                        | 9 |  |    | 3                        | 2 |  |    | 4                        | 7 |  |    | 1                        | 3 |  |
| +     | 2                        | 5 |  | +  | 2                        | 6 |  | +  | 3                        | 4 |  | +  | 2                        | 6 |  | +  | 3                        | 9 |  |
| <hr/> |                          |   |  |    |                          |   |  |    |                          |   |  |    |                          |   |  |    |                          |   |  |

2. Aşağıdaki toplama işlemlerini yapalım. Bulduğumuz sonuçları eşleştirelim.

|                        |                       |    |                        |                       |    |
|------------------------|-----------------------|----|------------------------|-----------------------|----|
| $26 + 29 = \dots\dots$ | <input type="radio"/> | 80 | $37 + 37 = \dots\dots$ | <input type="radio"/> | 64 |
| $14 + 27 = \dots\dots$ | <input type="radio"/> | 90 | $46 + 15 = \dots\dots$ | <input type="radio"/> | 74 |
| $33 + 39 = \dots\dots$ | <input type="radio"/> | 64 | $39 + 43 = \dots\dots$ | <input type="radio"/> | 65 |
| $24 + 56 = \dots\dots$ | <input type="radio"/> | 73 | $25 + 39 = \dots\dots$ | <input type="radio"/> | 60 |
| $43 + 18 = \dots\dots$ | <input type="radio"/> | 55 | $34 + 17 = \dots\dots$ | <input type="radio"/> | 50 |
| $28 + 14 = \dots\dots$ | <input type="radio"/> | 52 | $47 + 18 = \dots\dots$ | <input type="radio"/> | 81 |
| $35 + 17 = \dots\dots$ | <input type="radio"/> | 61 | $56 + 15 = \dots\dots$ | <input type="radio"/> | 71 |
| $49 + 24 = \dots\dots$ | <input type="radio"/> | 41 | $37 + 13 = \dots\dots$ | <input type="radio"/> | 51 |
| $36 + 28 = \dots\dots$ | <input type="radio"/> | 42 | $42 + 18 = \dots\dots$ | <input type="radio"/> | 61 |
| $54 + 36 = \dots\dots$ | <input type="radio"/> | 72 | $33 + 48 = \dots\dots$ | <input type="radio"/> | 82 |

1. Aşağıdaki toplama işlemlerini yapalım. Bulduğumuz sonuçlara göre sayıların buldukları bölümleri uygun renklerle boyayalım.

|             |                        |                        |                        |
|-------------|------------------------|------------------------|------------------------|
| <b>SARI</b> | $38 + 58 = \dots\dots$ | $69 + 29 = \dots\dots$ | $18 + 79 = \dots\dots$ |
|-------------|------------------------|------------------------|------------------------|

|              |                        |                        |                        |
|--------------|------------------------|------------------------|------------------------|
| <b>SIYAH</b> | $59 + 26 = \dots\dots$ | $19 + 49 = \dots\dots$ | $48 + 21 = \dots\dots$ |
|--------------|------------------------|------------------------|------------------------|

|              |                        |                        |                        |
|--------------|------------------------|------------------------|------------------------|
| <b>YEŞİL</b> | $18 + 61 = \dots\dots$ | $17 + 32 = \dots\dots$ | $17 + 48 = \dots\dots$ |
|--------------|------------------------|------------------------|------------------------|

|                   |                        |                        |
|-------------------|------------------------|------------------------|
| <b>KAHVERENGİ</b> | $66 + 28 = \dots\dots$ | $18 + 18 = \dots\dots$ |
|-------------------|------------------------|------------------------|

|    |    |    |    |    |    |    |    |    |    |    |    |    |    |    |
|----|----|----|----|----|----|----|----|----|----|----|----|----|----|----|
| 79 | 79 | 65 | 79 | 49 | 65 | 49 | 49 | 65 | 79 | 49 | 49 | 79 | 49 | 79 |
| 65 | 79 | 49 | 65 | 49 | 97 | 76 | 98 | 76 | 98 | 79 | 79 | 49 | 65 | 79 |
| 79 | 65 | 49 | 76 | 97 | 97 | 97 | 98 | 97 | 98 | 97 | 76 | 65 | 79 | 65 |
| 49 | 79 | 98 | 76 | 98 | 97 | 76 | 97 | 98 | 97 | 76 | 76 | 97 | 49 | 49 |
| 79 | 65 | 76 | 97 | 76 | 97 | 76 | 97 | 97 | 97 | 98 | 98 | 76 | 65 | 79 |
| 65 | 98 | 85 | 68 | 85 | 68 | 68 | 76 | 68 | 69 | 85 | 68 | 85 | 98 | 65 |
| 49 | 69 | 69 |    |    |    | 69 | 69 | 85 |    |    |    | 69 | 69 | 65 |
| 79 | 97 | 68 |    | 94 |    | 85 | 98 | 85 |    | 36 |    | 68 | 97 | 79 |
| 49 | 76 | 98 | 85 | 69 | 68 | 98 | 98 | 76 | 69 | 85 | 69 | 97 | 76 | 49 |
| 79 | 76 | 76 | 98 | 97 | 98 | 97 | 76 | 97 | 98 | 97 | 76 | 76 | 98 | 79 |
| 65 | 79 | 97 | 98 | 69 | 76 | 98 | 97 | 98 | 76 | 85 | 98 | 98 | 79 | 49 |
| 49 | 65 | 98 | 76 | 98 | 85 | 85 | 69 | 68 | 69 | 97 | 76 | 98 | 49 | 79 |
| 79 | 65 | 65 | 97 | 76 | 97 | 76 | 97 | 98 | 76 | 97 | 76 | 65 | 49 | 65 |
| 49 | 65 | 79 | 49 | 79 | 76 | 76 | 76 | 97 | 76 | 65 | 49 | 79 | 49 | 79 |
| 79 | 49 | 49 | 79 | 49 | 49 | 79 | 65 | 49 | 79 | 65 | 79 | 65 | 65 | 49 |

1. Aşağıdaki toplama işlemlerini yapalım. Bulduğumuz sonuçlara göre sayıların buldukları bölümleri uygun renklerle boyayalım.

84  Kırmızı 

71  Sarı 

92  Yeşil 



16+55=

27+44=

33+38=

24+47=

26+66=

45+47=

22+49=

39+32=

75+9=

48+36=

26+45=

27+57=

69+15=

62+9=

55+29=

84

35+36=

13+58=

66+18=



















19+65=

26+58=

19+52=

29+42=

1. Aşağıdaki toplama işlemlerini yapalım.



1. Aşağıdaki toplama işlemlerini inceleyelim. Doğru yapılan işlemlerin olduğu armutları sarıya, yanlış yapılan işlemlerin olduğu armutları kırmızıya boyayalım.

$$\begin{array}{r} 59 \\ + 29 \\ \hline 88 \end{array}$$

$$\begin{array}{r} 17 \\ + 66 \\ \hline 73 \end{array}$$

$$\begin{array}{r} 19 \\ + 43 \\ \hline 62 \end{array}$$

$$\begin{array}{r} 64 \\ + 16 \\ \hline 80 \end{array}$$

$$\begin{array}{r} 57 \\ + 36 \\ \hline 83 \end{array}$$

$$\begin{array}{r} 48 \\ + 29 \\ \hline 87 \end{array}$$

$$\begin{array}{r} 65 \\ + 16 \\ \hline 72 \end{array}$$

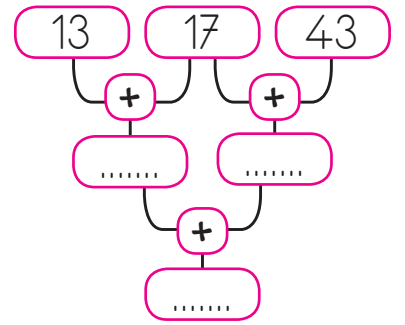
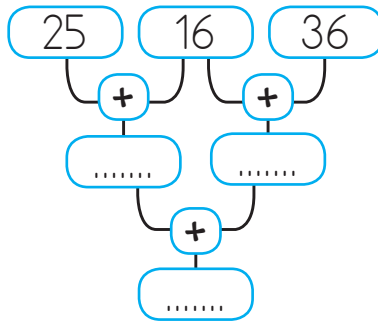
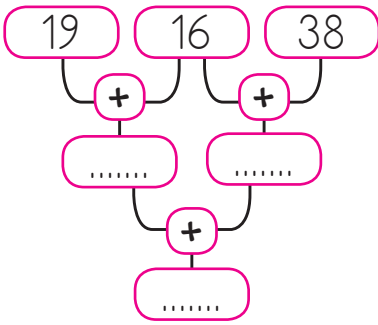
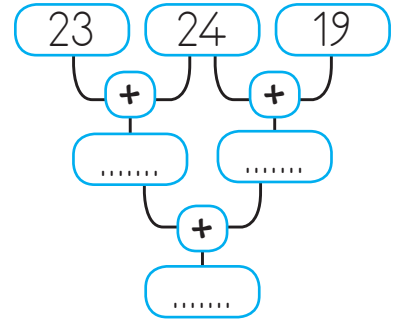
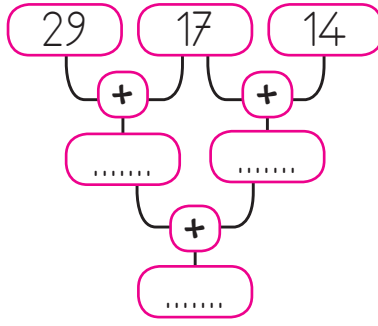
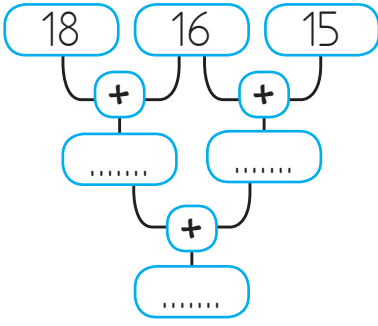
$$\begin{array}{r} 63 \\ + 19 \\ \hline 82 \end{array}$$

2. Aşağıdaki tabloda verilen toplama işlemlerini örnekteki gibi yapalım.







| +  | 38 | 26 | 47 | 17 |
|----|----|----|----|----|
| 18 | 56 | 44 | 65 | 35 |
| 45 |    |    |    |    |
| 36 |    |    |    |    |
| 27 |    |    |    |    |

| +  | 25 | 46 | 35 | 38 |
|----|----|----|----|----|
| 39 |    |    |    |    |
| 26 |    |    |    |    |
| 15 |    |    |    |    |
| 29 |    |    |    |    |

1. Aşağıdaki şemalarda verilen toplama işlemlerini yapalım.

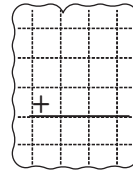
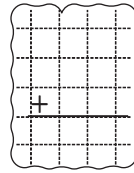
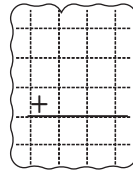
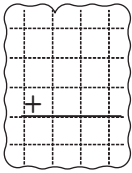

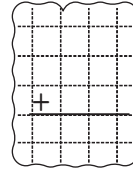
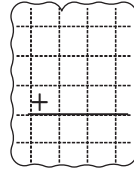
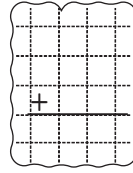
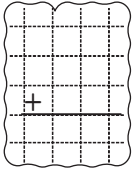
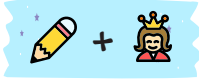



2. Aşağıdaki robotların üzerinde bulunan işlemleri yapalım. Bulduğunuz sonucun yazılı olduğu bölümü boyayalım.





1. Aşağıdaki görsellerin temsil ettiği sayıları kullanarak istenilen işlemleri örnekteki gibi yapalım.



2. Aşağıdaki toplama işlemlerini yapalım. Bulduğunuz sonuçların yazılı olduğu balonlarla, işlemlerin altındaki yıldızları aynı renge boyayalım.

$$\begin{array}{r} 19 \\ + 43 \\ \hline \end{array}$$



$$\begin{array}{r} 16 \\ + 35 \\ \hline \end{array}$$



$$\begin{array}{r} 36 \\ + 28 \\ \hline \end{array}$$



$$\begin{array}{r} 27 \\ + 55 \\ \hline \end{array}$$



$$\begin{array}{r} 39 \\ + 14 \\ \hline \end{array}$$



$$\begin{array}{r} 38 \\ + 32 \\ \hline \end{array}$$



$$\begin{array}{r} 46 \\ + 25 \\ \hline \end{array}$$



$$\begin{array}{r} 34 \\ + 29 \\ \hline \end{array}$$

