

1. Aşağıdaki çıkarma işlemlerini yapınız. Bulduğunuz sonuçlar 50'den büyükse yıldızları maviye, 50'den küçükse yıldızları kırmızıya boyayalım.

$$95 - 43 = \dots\dots$$

$$74 - 32 = \dots\dots$$

$$86 - 14 = \dots\dots$$

$$66 - 42 = \dots\dots$$

$$86 - 16 = \dots\dots$$

$$79 - 25 = \dots\dots$$

$$99 - 71 = \dots\dots$$

$$53 - 12 = \dots\dots$$

$$75 - 24 = \dots\dots$$

$$95 - 43 = \dots\dots$$

$$38 - 32 = \dots\dots$$

$$59 - 47 = \dots\dots$$

$$63 - 31 = \dots\dots$$

$$55 - 40 = \dots\dots$$

$$88 - 21 = \dots\dots$$

$$74 - 20 = \dots\dots$$

$$86 - 50 = \dots\dots$$

$$85 - 20 = \dots\dots$$

$$99 - 54 = \dots\dots$$

$$43 - 31 = \dots\dots$$

$$73 - 23 = \dots\dots$$

$$84 - 21 = \dots\dots$$

$$65 - 11 = \dots\dots$$

$$76 - 61 = \dots\dots$$

$$33 - 10 = \dots\dots$$

$$88 - 36 = \dots\dots$$

$$65 - 14 = \dots\dots$$

$$94 - 43 = \dots\dots$$

$$43 - 33 = \dots\dots$$

$$77 - 21 = \dots\dots$$

1. Aşağıdaki çıkarma işlemlerini yapınız. Sonucu 50'den küçük olan balıkları maviye, 50'den büyük olan balıkları griye boyayınız.

62-15=

72-18=

66-29=

92-26=

83-14=

56-28=

50-15=

76-17=

73-25=

63-39=

53-14=

60-19=

83-25=

93-29=

84-15=

71-14=

54-6=

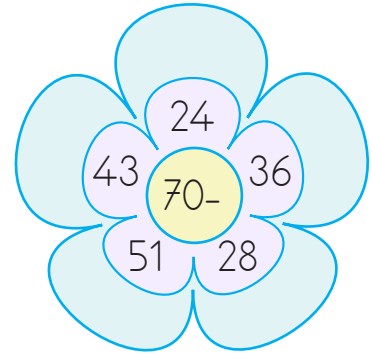
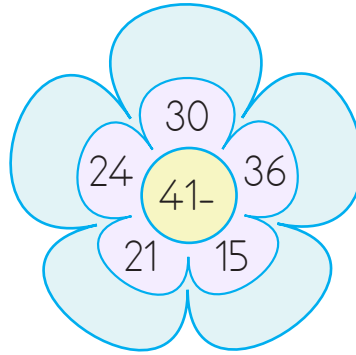
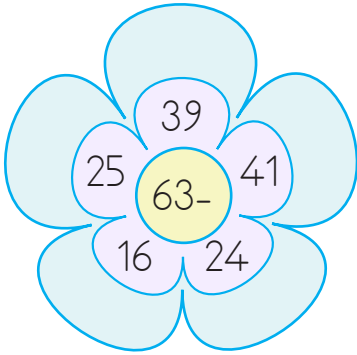
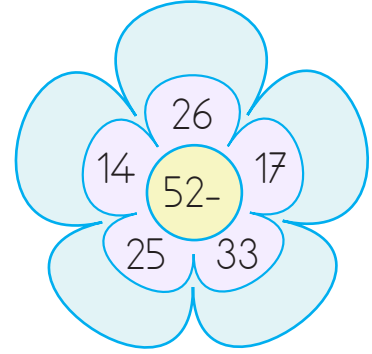
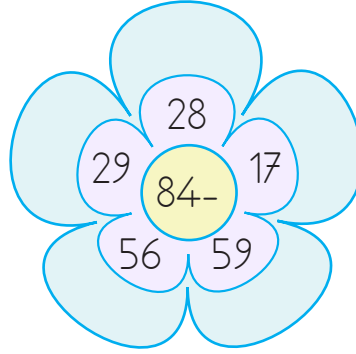
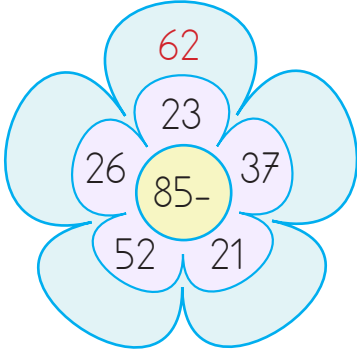
43-16=

95-27=

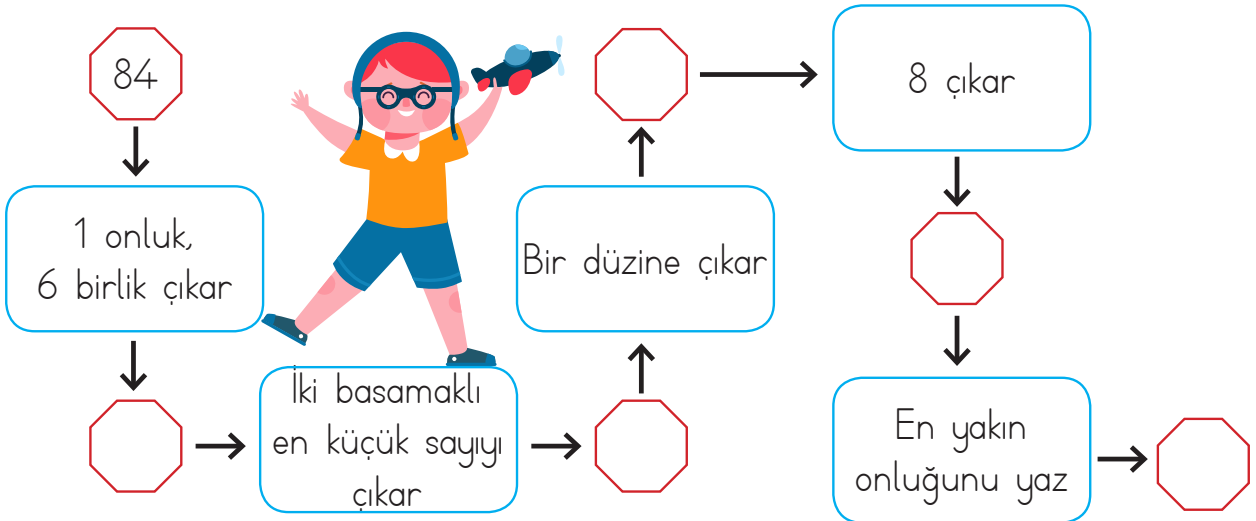
52-16=

50-26=

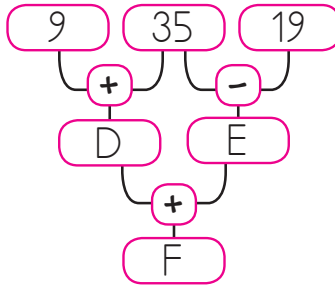
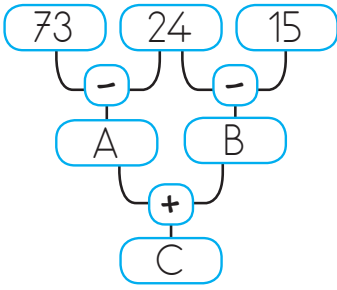
1. Verilen sayıları çiçeğin ortasındaki sayıdan çıkararak boş bırakılan alana örnekteki gibi işlem sonuçlarını yazalım.



2. Verilen yönergeleri takip ederek işlemleri yapınız.



1. Şemalardaki harflerin yerine yazılması gereken sayıları bulup işlemleri yapınız.



$$\begin{array}{r} A \\ + D \\ \hline \end{array} \quad \begin{array}{r} F \\ - B \\ \hline \end{array} \quad \begin{array}{r} D \\ - E \\ \hline \end{array}$$

$$\begin{array}{r} C \\ - E \\ \hline \end{array} \quad \begin{array}{r} F \\ + B \\ \hline \end{array} \quad \begin{array}{r} C \\ - A \\ \hline \end{array}$$

2. Aşağıdaki çıkarma işlemlerini yapalım. İşlemin harfini, sonucunun verildiği kısma yazarak şifreyi çözelim.

$$\begin{array}{r} 91 \\ - 43 \\ \hline \\ \end{array}$$

M

$$\begin{array}{r} 95 \\ - 56 \\ \hline \\ \end{array}$$

L

$$\begin{array}{r} 62 \\ - 33 \\ \hline \\ \end{array}$$

A

$$\begin{array}{r} 55 \\ - 17 \\ \hline \\ \end{array}$$

Ç

$$\begin{array}{r} 90 \\ - 55 \\ \hline \\ \end{array}$$

İ

$$\begin{array}{r} 77 \\ - 59 \\ \hline \\ \end{array}$$

R

$$\begin{array}{r} 74 \\ - 28 \\ \hline \\ \end{array}$$

I

$$\begin{array}{r} 64 \\ - 36 \\ \hline \\ \end{array}$$

Ş

$$\begin{array}{r} 56 \\ - 29 \\ \hline \\ \end{array}$$

K

$$\begin{array}{r} 64 \\ - 17 \\ \hline \\ \end{array}$$


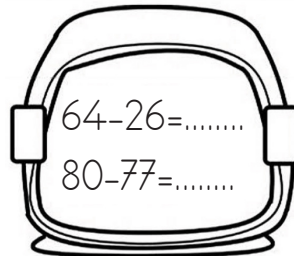


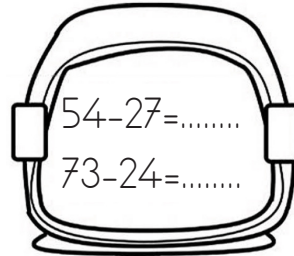
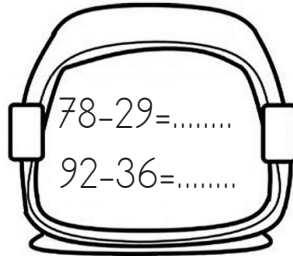
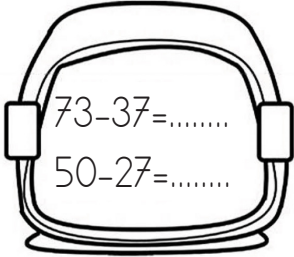








E

38	46	27	29	18	48	29


35	28	39	47	48	35



1. Aşağıdaki çıkarma işlemlerini yapınız. Ardından kaskları boyayabilirsiniz.



1. Aşağıdaki çıkarma işlemlerini yapınız. Ardından bulduğunuz sonuçlara uygun renklerle resmi boyayınız.



59 = Kahverengi

37 = Sarı

48 = Turuncu

26 = Yeşil

1. Aşağıdaki toplama işlemlerini inceleyelim. Doğru yapılan işlemlerin olduğu yumurtaları kahverengiye, yanlış yapılan işlemlerin olduğu yumurtaları maviye boyayalım.

$$\begin{array}{r} 78 \\ - 41 \\ \hline 37 \end{array}$$

$$\begin{array}{r} 55 \\ - 26 \\ \hline 31 \end{array}$$

$$\begin{array}{r} 59 \\ - 41 \\ \hline 08 \end{array}$$

$$\begin{array}{r} 82 \\ - 48 \\ \hline 34 \end{array}$$

$$\begin{array}{r} 90 \\ - 26 \\ \hline 64 \end{array}$$

$$\begin{array}{r} 44 \\ - 16 \\ \hline 38 \end{array}$$

$$\begin{array}{r} 86 \\ - 40 \\ \hline 40 \end{array}$$

$$\begin{array}{r} 67 \\ - 35 \\ \hline 32 \end{array}$$

$$\begin{array}{r} 84 \\ - 46 \\ \hline 38 \end{array}$$

$$\begin{array}{r} 38 \\ - 28 \\ \hline 10 \end{array}$$

$$\begin{array}{r} 76 \\ - 58 \\ \hline 28 \end{array}$$

$$\begin{array}{r} 91 \\ - 72 \\ \hline 19 \end{array}$$

$$\begin{array}{r} 66 \\ - 45 \\ \hline 11 \end{array}$$

$$\begin{array}{r} 57 \\ - 24 \\ \hline 33 \end{array}$$

$$\begin{array}{r} 95 \\ - 50 \\ \hline 35 \end{array}$$

2. Aşağıdaki tabloda verilen toplama işlemlerini örnekteki gibi yapalım.

—	36	53	48	41
92	56	39	44	51
75				
60				
81				

—	25	18	51	36
73				
80				
94				
62				