

1. Aşağıdaki işlemlerde verilmeyenleri bulup tabloya yazalım.

$$\begin{array}{r} 56 \\ + 2 \text{ 🐣} \\ \hline 84 \end{array}$$

$$\begin{array}{r} 29 \\ + 6 \text{ 🧤} \\ \hline 90 \end{array}$$

$$\begin{array}{r} 58 \\ + \text{ 🌳 } 5 \\ \hline 93 \end{array}$$









$$\begin{array}{r} 56 \\ + 1 \text{ 🍏} \\ \hline 68 \end{array}$$

$$\begin{array}{r} 63 \\ + 2 \text{ ☀️} \\ \hline 87 \end{array}$$

$$\begin{array}{r} 51 \\ + 1 \text{ ☂️} \\ \hline 66 \end{array}$$

$$\begin{array}{r} 57 \\ + 2 \text{ 🧢} \\ \hline 81 \end{array}$$

$$\begin{array}{r} 24 \\ + 5 \text{ 🚢} \\ \hline 74 \end{array}$$

2. Aşağıdaki işlemlerde verilmeyenleri bulup yazalım.

