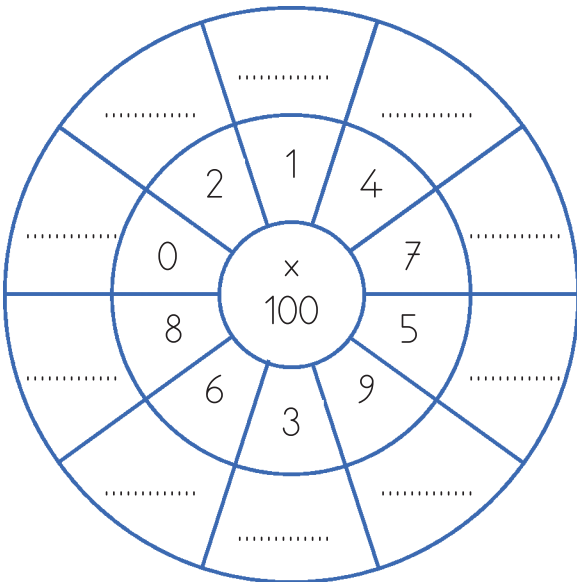
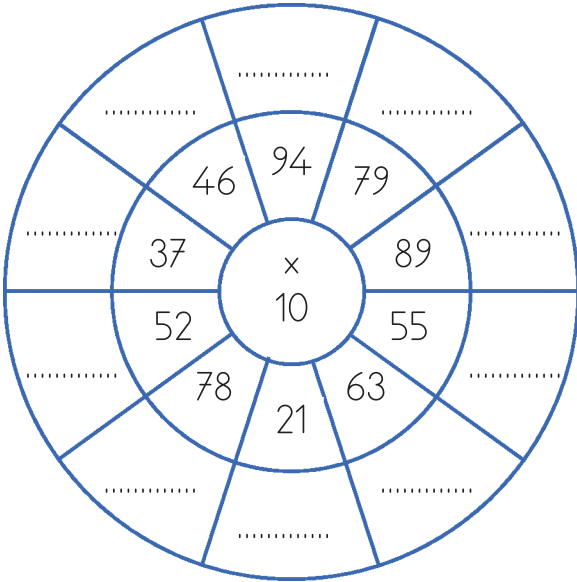
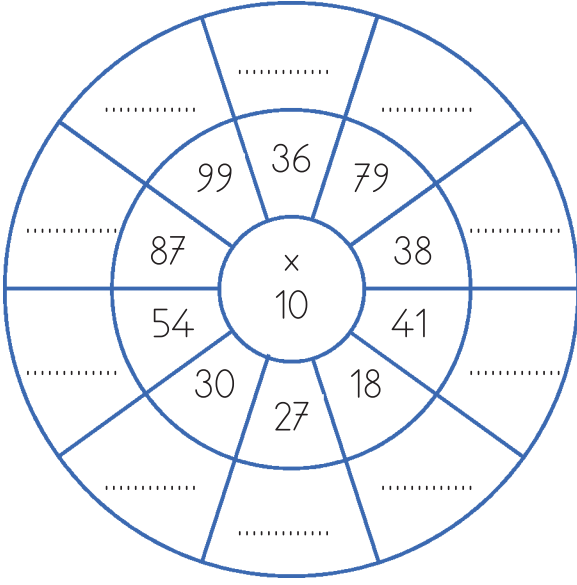


● Aşağıdaki çemberin ortasındaki sayı ile etrafındaki sayıları çarpıp en dıştaki noktalı alanlara yazınız.



● Aşağıdaki çarpma işlemlerini yapınız.

$$\begin{array}{r} 77 \\ \times 10 \\ \hline \end{array}$$

$$\begin{array}{r} 31 \\ \times 10 \\ \hline \end{array}$$

$$\begin{array}{r} 19 \\ \times 10 \\ \hline \end{array}$$

$$\begin{array}{r} 49 \\ \times 10 \\ \hline \end{array}$$

$$\begin{array}{r} 54 \\ \times 10 \\ \hline \end{array}$$

$$\begin{array}{r} 60 \\ \times 10 \\ \hline \end{array}$$

$$\begin{array}{r} 18 \\ \times 10 \\ \hline \end{array}$$

$$\begin{array}{r} 92 \\ \times 10 \\ \hline \end{array}$$

$$\begin{array}{r} 24 \\ \times 10 \\ \hline \end{array}$$

$$\begin{array}{r} 91 \\ \times 10 \\ \hline \end{array}$$

$$\begin{array}{r} 81 \\ \times 10 \\ \hline \end{array}$$

$$\begin{array}{r} 79 \\ \times 10 \\ \hline \end{array}$$

$$\begin{array}{r} 59 \\ \times 10 \\ \hline \end{array}$$

$$\begin{array}{r} 30 \\ \times 10 \\ \hline \end{array}$$

$$\begin{array}{r} 36 \\ \times 10 \\ \hline \end{array}$$

$$\begin{array}{r} 82 \\ \times 10 \\ \hline \end{array}$$

$$\begin{array}{r} 53 \\ \times 10 \\ \hline \end{array}$$

$$\begin{array}{r} 88 \\ \times 10 \\ \hline \end{array}$$

$$\begin{array}{r} 26 \\ \times 10 \\ \hline \end{array}$$

$$\begin{array}{r} 55 \\ \times 10 \\ \hline \end{array}$$

$$\begin{array}{r} 72 \\ \times 10 \\ \hline \end{array}$$

$$\begin{array}{r} 63 \\ \times 10 \\ \hline \end{array}$$

$$\begin{array}{r} 64 \\ \times 10 \\ \hline \end{array}$$

$$\begin{array}{r} 71 \\ \times 10 \\ \hline \end{array}$$

$$\begin{array}{r} 28 \\ \times 10 \\ \hline \end{array}$$

$$\begin{array}{r} 70 \\ \times 10 \\ \hline \end{array}$$

$$\begin{array}{r} 66 \\ \times 10 \\ \hline \end{array}$$