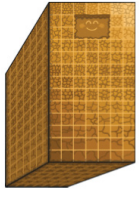




- Aşağıdaki nesnelere dikdörtgen prizmaya benzeyenleri işaretleyiniz.



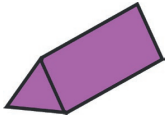
- Aşağıdaki nesnelere küreye benzeyenleri işaretleyiniz.




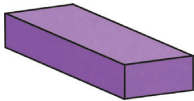
- Aşağıda verilen geometrik cisimleri yüzleriyle ve yüzün isimleriyle eşleştiriniz.



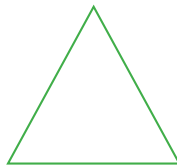
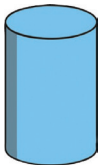
Üçgen



Çember



Dikdörtgen



Kare