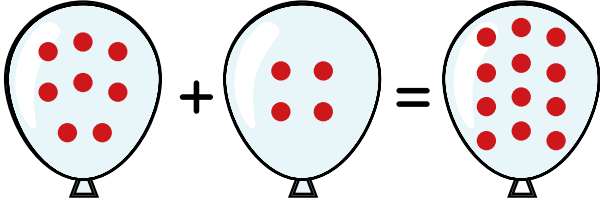


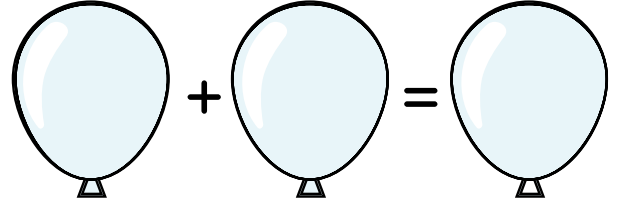
Konu: Toplama İşlemi

Adım-Soyadım:

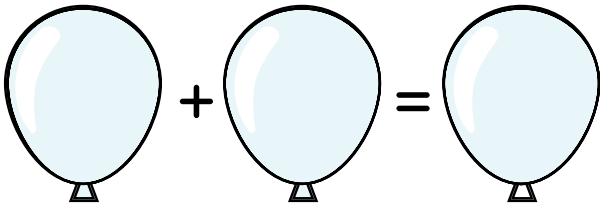
👉 Aşağıdaki işlemlere uygun olarak balonların üzerine örnekteki gibi noktalar yapalım. Ardından noktaları toplayıp işlemi yapalım.



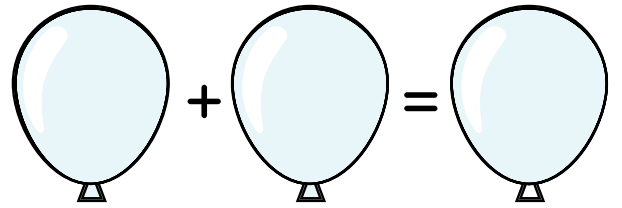
$$8 + 4 = 12$$



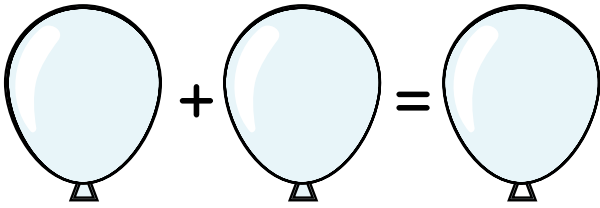
$$6 + 5 = \dots\dots\dots$$



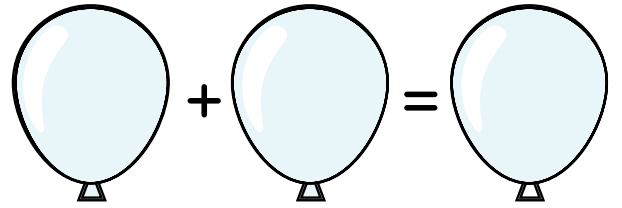
$$4 + 3 = \dots\dots\dots$$



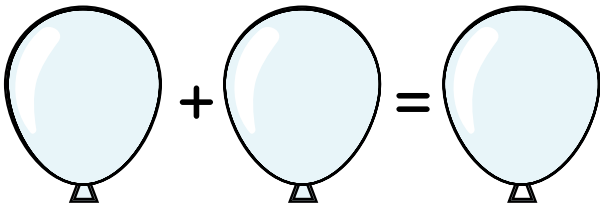
$$7 + 2 = \dots\dots\dots$$



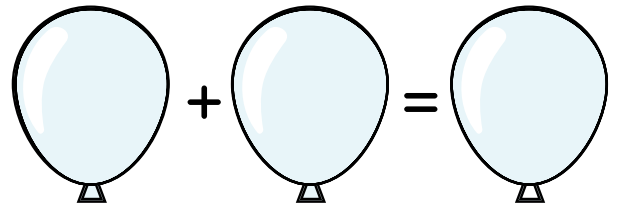
$$4 + 6 = \dots\dots\dots$$



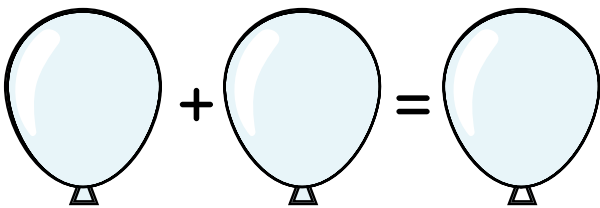
$$5 + 5 = \dots\dots\dots$$



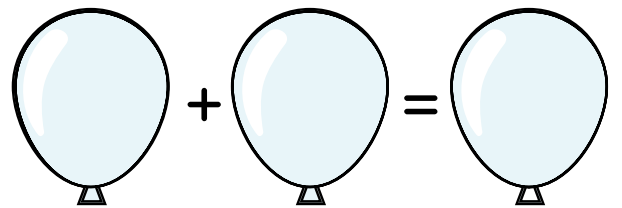
$$3 + 4 = \dots\dots\dots$$



$$5 + 2 = \dots\dots\dots$$



$$8 + 3 = \dots\dots\dots$$



$$1 + 9 = \dots\dots\dots$$