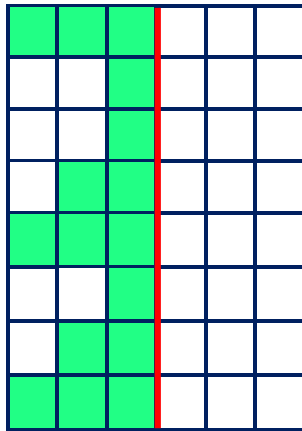
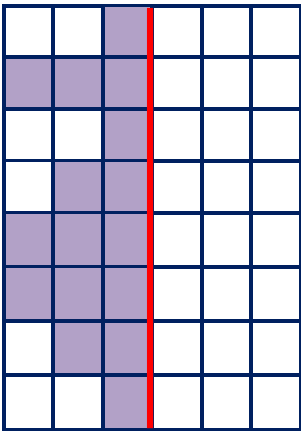
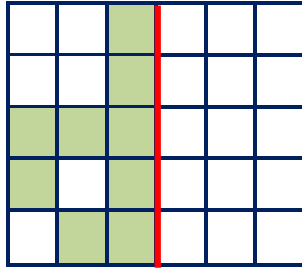
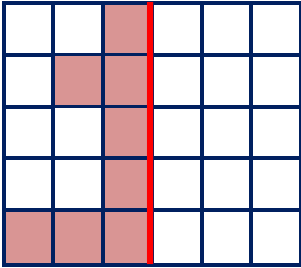
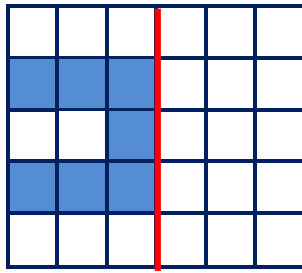
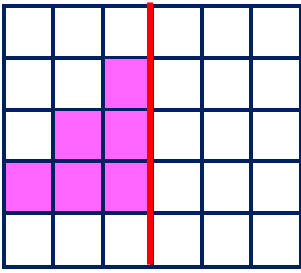
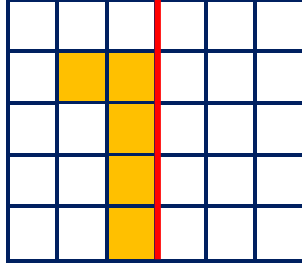
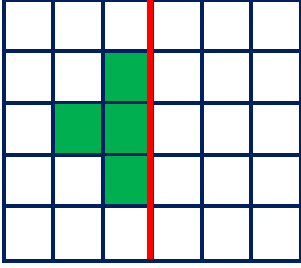


SİMETRİ

Herhangi iki nesne ya da şekil üst üste katlandığında her iki parça birbirine eşit oluyorsa bu nesnelere "simetriktir" denir. İki eş parçaya ayrılabilen şekillere simetrik şekil deriz. Simetrik şekillerde parçalar birbirinin eşidir.

- Aşağıda verilen şekillerdeki boyalı alanları simetrik olarak boyayınız.



- Aşağıda verilen şekillerin, simetri çizgilerine göre diğer yarılarını (eş parçalarını) çiziniz.

