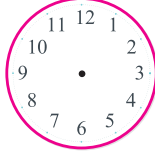
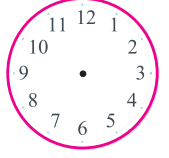


● Aşağıda okunuşu verilen zamanları saat yüzeyine çizerek gösteriniz.

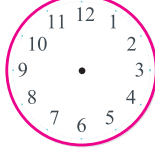
Saat yediyi yirmi geçiyor



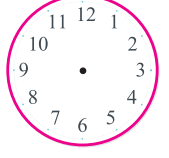
Saat on biri on geçiyor




Saat dokuzu beş geçiyor



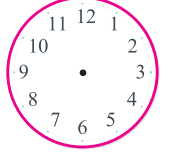
Saat yediyi çeyrek geçiyor



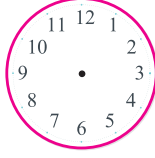
Saat ona on var



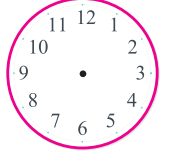
Saat on ikiye çeyrek var



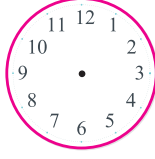
Saat on ikiye yirmi var



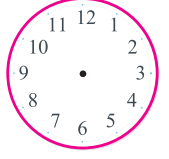
Saat on bire beş var



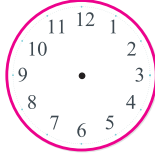
Saat beşi yirmi beş geçiyor



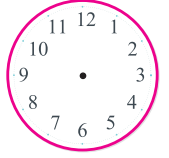
Saat dördü on geçiyor



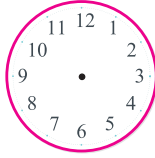
Saat bire beş var



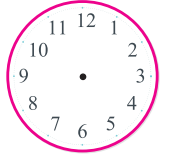
Saat üçü yirmi beş geçiyor



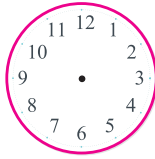
Saat sekize yirmi beş var



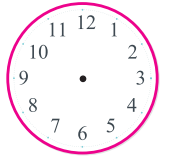
Saat bire çeyrek var



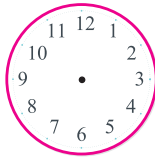
Saat altıyı on geçiyor



Saat ikiyi yirmi geçiyor



Saat beşe beş var



Saat on iki buçuk

