

# SAATLERİ YAZALIM

Aşağıdaki saatlerin kaçı gösterdiğini yazınız.



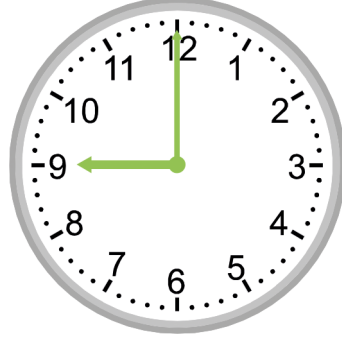
Saat: .....04.00.....

Saat: .....dört.....



Saat: .....

Saat: .....



Saat: .....

Saat: .....




Saat: .....

Saat: .....



Saat: .....

Saat: .....




Saat: .....

Saat: .....




Saat: .....

Saat: .....



Saat: .....

Saat: .....



Saat: .....

Saat: .....



Saat: .....

Saat: .....