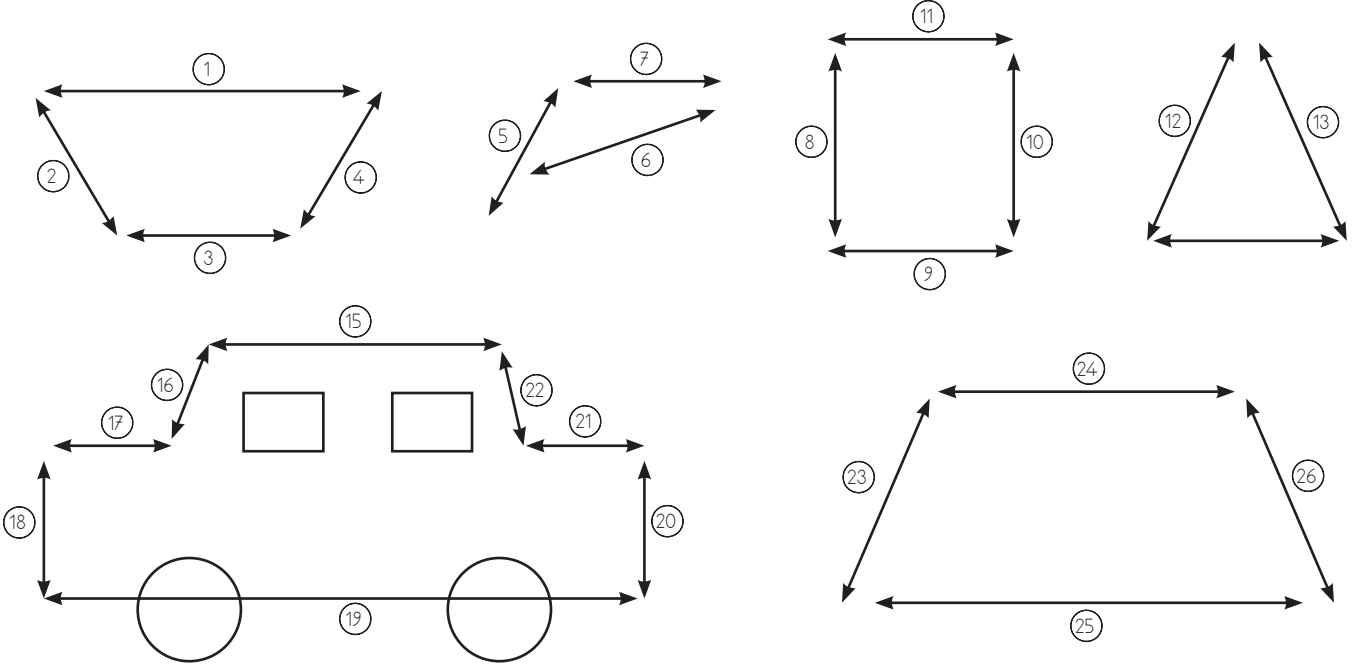


YATAY, DİKEY VE EĞİK DOĞRULAR

● Aşağıda resimlerde verilen numaralı doğruları yatay, dikey ve eğik olarak sınıflandıralım.




Yatay Doğrular :

Dikey Doğrular :

Eğik Doğrular :

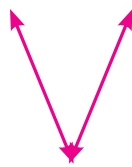
● Aşağıda verilen harfleri inceleyiniz. Her harfte bulunan "yatay doğru", "dikey doğru" ve "eğik doğru" modellerini belirleyip altlarına yazınız.



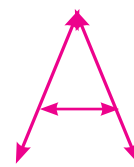
..... yatay
..... dikey
..... eğik




..... yatay
..... dikey
..... eğik




..... yatay
..... dikey
..... eğik



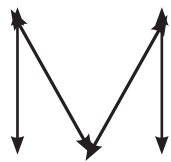
..... yatay
..... dikey
..... eğik



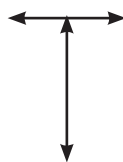
..... yatay
..... dikey
..... eğik



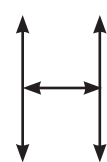
..... yatay
..... dikey
..... eğik



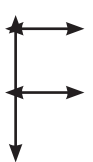
..... yatay
..... dikey
..... eğik



..... yatay
..... dikey
..... eğik



..... yatay
..... dikey
..... eğik



..... yatay
..... dikey
..... eğik