

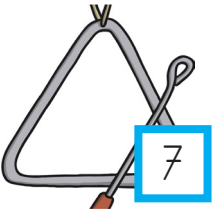
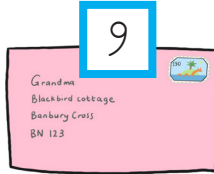


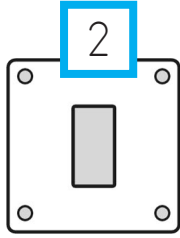


# ETKİNLİK ZAMANI

☞ Aşağıdaki nesnelerin hangi geometrik şekillere benzediğini örnekteki gibi numaralandırarak belirtiniz.

KARE	ÜÇGEN	DİKDÖRTGEN	ÇEMBER
2.			



☞ Aşağıdaki görseli belirtilen renklerle dikkatlice boyayınız.

Üçgen → Kırmızı

Kare → Mavi

Çember → Siyah

Dikdörtgen → Sarı

